

Write your name here

Surname

Other names

Pearson Edexcel
International
Advanced Level

Centre Number

--	--	--	--	--	--

Candidate Number

--	--	--	--	--	--

Chemistry

Advanced

**Unit 5: General Principles of Chemistry II – Transition
Metals and Organic Nitrogen Chemistry
(including synoptic assessment)**

Friday 19 January 2018 – Morning

Time: 1 hour 40 minutes

Paper Reference

WCH05/01

**Candidates must have: Scientific calculator
Data Booklet**

Total Marks

Instructions

- Use **black** ink or **black** ball-point pen.
- **Fill in the boxes** at the top of this page with your name, centre number and candidate number.
- Answer **all** questions.
- Answer the questions in the spaces provided
– *there may be more space than you need.*

Information

- The total mark for this paper is 90.
- The marks for **each** question are shown in brackets
– *use this as a guide as to how much time to spend on each question.*
- Questions labelled with an **asterisk** (*) are ones where the quality of your written communication will be assessed
– *you should take particular care with your spelling, punctuation and grammar, as well as the clarity of expression, on these questions.*
- A Periodic Table is printed on the back cover of this paper.

Advice

- Read each question carefully before you start to answer it.
- Try to answer every question.
- Check your answers if you have time at the end.
- Show all your working in calculations and include units where appropriate.

Turn over ►

P51947A

©2018 Pearson Education Ltd.

6/5/5/1/

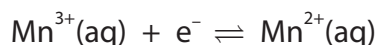


Pearson

SECTION A

Answer ALL the questions in this section. You should aim to spend no more than 20 minutes on this section. For each question, select one answer from A to D and put a cross in the box . If you change your mind, put a line through the box and then mark your new answer with a cross .

- 1 Which electrode and solution would be used to measure the standard electrode potential of the manganese(III)/manganese(II) half-cell?



	Electrode	Solution
<input type="checkbox"/> A	manganese	1 mol dm ⁻³ Mn ³⁺ (aq)
<input type="checkbox"/> B	manganese	1 mol dm ⁻³ with respect to Mn ³⁺ (aq) and Mn ²⁺ (aq)
<input type="checkbox"/> C	platinum	1 mol dm ⁻³ Mn ³⁺ (aq)
<input type="checkbox"/> D	platinum	1 mol dm ⁻³ with respect to Mn ³⁺ (aq) and Mn ²⁺ (aq)

(Total for Question 1 = 1 mark)

- 2 In which pair of species are the oxidation numbers of the d-block elements the same?

- A [Cr(NH₃)₄Cl₂]⁺ and [Mn(H₂O)₆]²⁺
- B CrO₄²⁻ and TiCl₃
- C Cr₂O₃ and [Fe(CN)₆]³⁻
- D Cr₂O₇²⁻ and MnO₄⁻

(Total for Question 2 = 1 mark)

Use this space for any rough working. Anything you write in this space will gain no credit.

DO NOT WRITE IN THIS AREA

DO NOT WRITE IN THIS AREA

DO NOT WRITE IN THIS AREA



- 3 One mole of metal ions reacted in solution with one mole of sulfur dioxide. The half-equation for the sulfur dioxide reaction is



The original oxidation number of the metal was +3. What was the oxidation number of the metal after the reaction?

- A +1
 B +2
 C +4
 D +5

(Total for Question 3 = 1 mark)

- 4 This question concerns four complexes.

(a) Which complex has a tetrahedral structure?

(1)

- A $[\text{CrCl}_4]^-$
 B $[\text{CuCl}_2]^-$
 C $[\text{Pt}(\text{NH}_3)_2\text{Cl}_2]$
 D $[\text{TiCl}_6]^{2-}$

(b) Which complex contains a metal in the +1 oxidation state?

(1)

- A $[\text{CrCl}_4]^-$
 B $[\text{CuCl}_2]^-$
 C $[\text{Pt}(\text{NH}_3)_2\text{Cl}_2]$
 D $[\text{TiCl}_6]^{2-}$

(Total for Question 4 = 2 marks)

Use this space for any rough working. Anything you write in this space will gain no credit.



5 An ion of metal M has a charge of $+n$. It forms a complex ion with a charged bidentate ligand, L.

(a) The formula of the complex ion formed between the metal ion and the bidentate ligand is $[ML_2]^{(n-4)}$. What is the charge on ligand L? (1)

- A +2
- B 0
- C -2
- D -4

(b) Another complex ion can be formed in which both of the bidentate ligands L, in $[ML_2]^{(n-4)}$, are replaced by the neutral monodentate ligand Z. What is the formula of the complex ion? (1)

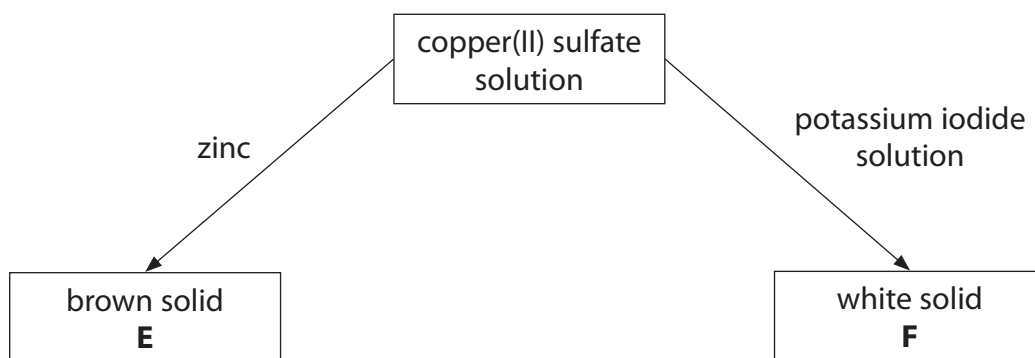
- A $[MZ_2]^{n+}$
- B $[MZ_2]^{2n+}$
- C $[MZ_4]^{n+}$
- D $[MZ_4]^{2n+}$

(Total for Question 5 = 2 marks)

Use this space for any rough working. Anything you write in this space will gain no credit.



6 Two reactions of copper(II) sulfate solution are shown.



(a) What is the insoluble brown solid **E**?

(1)

- A Copper
- B Copper(I) oxide
- C Copper(II) oxide
- D Zinc sulfate

(b) What is the insoluble white solid **F**?

(1)

- A Copper
- B Copper(I) iodide
- C Copper(II) iodide
- D Potassium sulfate

(Total for Question 6 = 2 marks)

7 When benzene reacts with a mixture of concentrated nitric and sulfuric acids, the reaction is

- A electrophilic addition.
- B electrophilic substitution.
- C nucleophilic addition.
- D nucleophilic substitution.

(Total for Question 7 = 1 mark)

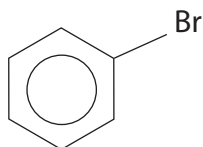


8 Benzene and phenol react with bromine.

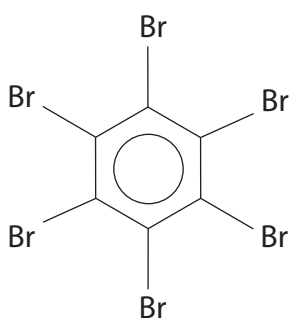
(a) What is the organic product when benzene reacts with excess bromine in the presence of ultraviolet light?

(1)

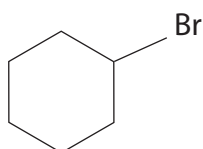
A



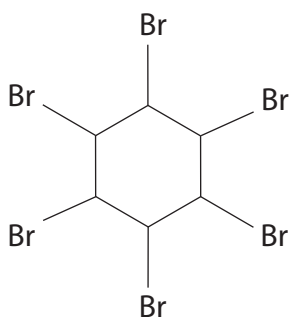
B



C



D



DO NOT WRITE IN THIS AREA

DO NOT WRITE IN THIS AREA

DO NOT WRITE IN THIS AREA



(b) Bromine reacts more readily with phenol than with benzene. This is because the

(1)

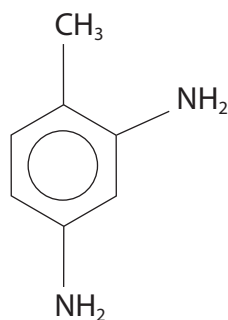
- A benzene ring in phenol is more susceptible to nucleophilic attack.
- B benzene ring in phenol is deactivated because the oxygen of the OH group is very electronegative.
- C lone pair of electrons on the oxygen atom in phenol overlap with the delocalised electrons in the benzene ring.
- D lone pair of electrons on the oxygen atom enable phenol to act as an electrophile.

(Total for Question 8 = 2 marks)

Use this space for any rough working. Anything you write in this space will gain no credit.



9 The structure of compound **G** is



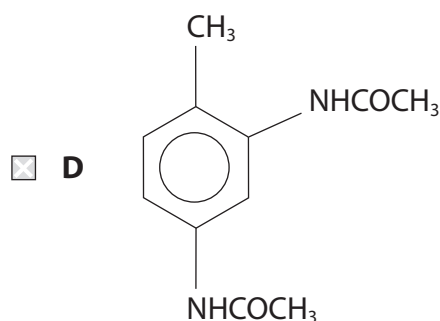
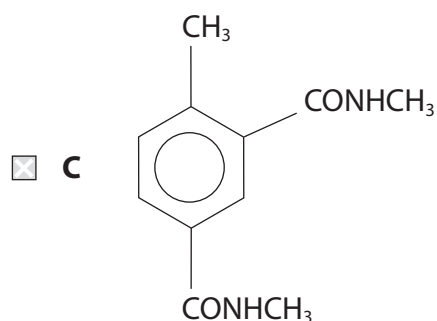
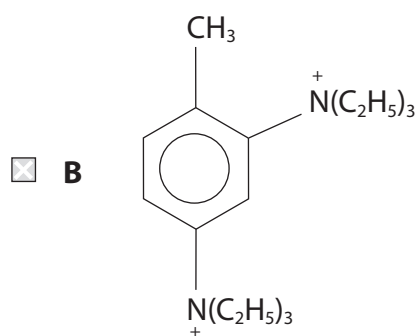
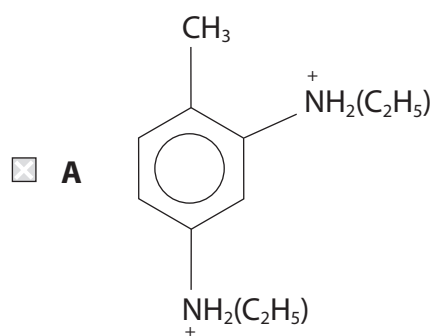
(a) What is the systematic name of compound **G**?

(1)

- A** 4-methylbenzene-1,3-diamine
- B** 4-methylbenzene-1,5-diamine
- C** 2-methylphenyldiamine
- D** 4-methylphenyldiamine

(b) What is the organic species formed in the reaction between compound **G** and **excess** ethanoyl chloride?

(1)



(Total for Question 9 = 2 marks)

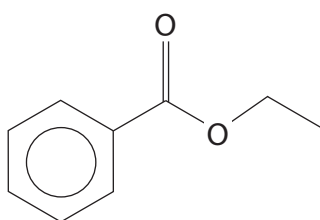


DO NOT WRITE IN THIS AREA

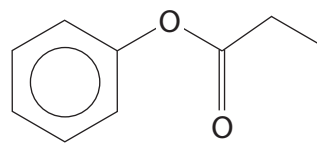
DO NOT WRITE IN THIS AREA

DO NOT WRITE IN THIS AREA

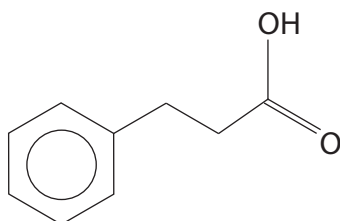
10 Four different compounds, **P**, **Q**, **R** and **S**, are structural isomers with molecular formula $C_9H_{10}O_2$.



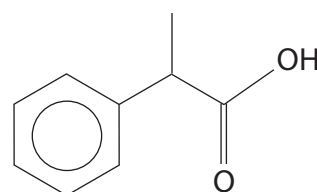
compound **P**



compound **Q**



compound **R**



compound **S**

(a) Which compound does **not** exhibit optical isomerism but does react with sodium hydrogencarbonate to give a colourless gas?

(1)

- A** Compound **P**
- B** Compound **Q**
- C** Compound **R**
- D** Compound **S**

(b) Which compound reacts with sodium hydroxide solution to give sodium benzoate as one of the products?

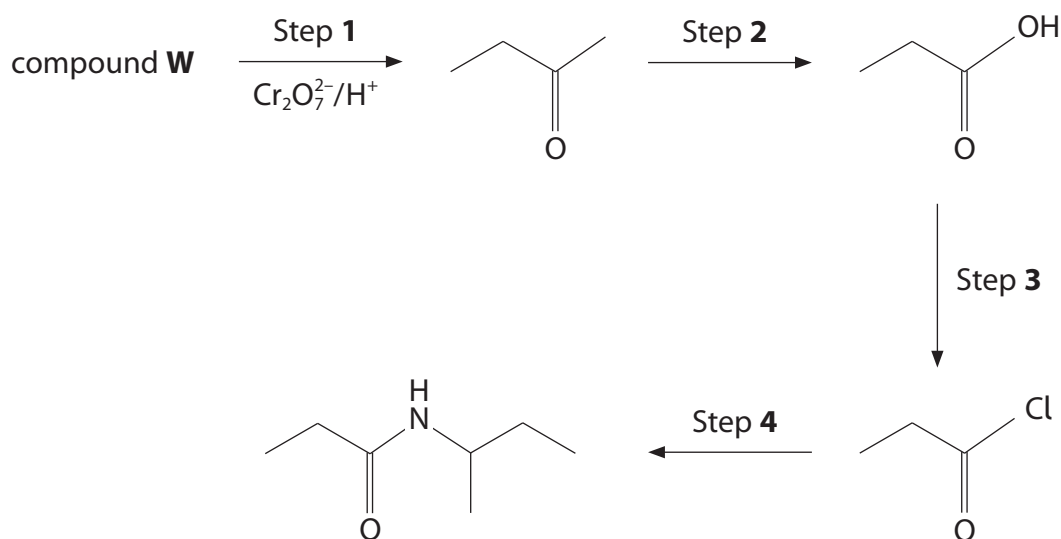
(1)

- A** Compound **P**
- B** Compound **Q**
- C** Compound **R**
- D** Compound **S**

(Total for Question 10 = 2 marks)



11 A reaction sequence is shown.



(a) What is compound **W**?

(1)

- A Butan-1-ol
- B Butan-2-ol
- C 2-methylpropan-1-ol
- D 2-methylpropan-2-ol

(b) Which substances are required for Step 2?

(1)

- A Acidified potassium dichromate(VI)
- B Iodine in alkali, followed by hydrochloric acid
- C Sodium hydroxide solution followed by hydrochloric acid
- D Ammoniacal silver nitrate (Tollens' reagent)

(c) Which is the reagent for Step 3?

(1)

- A Aqueous chlorine
- B Chlorine gas
- C Hydrochloric acid
- D Phosphorus(V) chloride



(d) Which is the reagent for Step 4?

(1)

- A $\text{CH}_3\text{CH}_2\text{CH}_2\text{CH}_2\text{NH}_2$
- B $\text{CH}_3\text{CH}(\text{NH}_2)\text{CH}_2\text{CH}_3$
- C $\text{CH}_3\text{CH}_2\text{CH}_2\text{CONH}_2$
- D $\text{CH}_3\text{CH}(\text{CONH}_2)\text{CH}_3$

(Total for Question 11 = 4 marks)

TOTAL FOR SECTION A = 20 MARKS

DO NOT WRITE IN THIS AREA

DO NOT WRITE IN THIS AREA

DO NOT WRITE IN THIS AREA



P 5 1 9 4 7 A 0 1 1 3 2

SECTION B

Answer ALL the questions. Write your answers in the spaces provided.

12 Aluminium and iron are both metallic elements. There are similarities and differences in the properties of their compounds.

(a) Both elements form compounds in which their oxidation number is +3.

(i) Complete the electronic configuration of the Al^{3+} and Fe^{3+} ions, using the s, p, d notation.

(2)

Al^{3+} $1s^2$

Fe^{3+} $1s^2$

(ii) Aluminium only forms compounds in which its oxidation number is +3, whereas iron has compounds with a variety of oxidation numbers. Suggest a reason why iron forms stable compounds with more than one oxidation number.

(1)

.....
.....
.....
.....

*(b) Most aluminium compounds are colourless but iron(III) compounds are coloured.

Explain why $[\text{Fe}(\text{H}_2\text{O})_6]^{3+}$ ions are coloured.

(4)

.....
.....
.....
.....
.....
.....
.....
.....
.....
.....

DO NOT WRITE IN THIS AREA

DO NOT WRITE IN THIS AREA

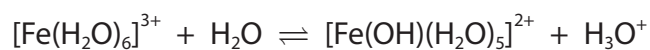
DO NOT WRITE IN THIS AREA



(c) Aluminium ions and iron(III) ions form complexes in solution.
These solutions are acidic.

- (i) Draw the structure of the $[\text{Fe}(\text{H}_2\text{O})_6]^{3+}$ complex ion, showing clearly the shape around the Fe^{3+} ion, and which atoms in the ligands are attached to the Fe^{3+} ion. (2)

*(ii) The following equilibrium occurs in aqueous solution



Suggest why one of the water ligands loses a proton.

(2)

.....

.....

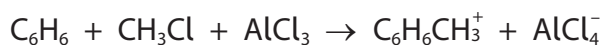
.....

.....



- (d) Aluminium chloride, AlCl_3 , and iron(III) chloride, FeCl_3 , can both be used as catalysts in Friedel-Crafts reactions.

The reaction between benzene and chloromethane, using an aluminium chloride catalyst, can be summarised as



Suggest, by reference to the electronic structure of AlCl_3 , how the AlCl_4^- ion forms.

(2)

.....

.....

.....

.....

- (e) Thiocyanate ions, SCN^- , are used to test for the presence of Fe^{3+} ions in aqueous solution. A blood red colour, caused by the complex ion $[\text{Fe}(\text{SCN})(\text{H}_2\text{O})_5]^{2+}$, is seen.

(i) State the type of reaction taking place.

(1)

.....

(ii) Draw a dot-and-cross diagram of the thiocyanate ion, $[\text{SCN}]^-$.
Hence suggest a structure of the ion, showing all the bonds and which atom has the negative charge.

(2)



(iii) Suggest **two** ways in which the thiocyanate ion could bond to the Fe^{3+} in the complex. (1)

(f) Aluminium hydroxide, $\text{Al}(\text{OH})_3$, is amphoteric.

Write **ionic** equations for the reactions of aluminium hydroxide with hydrochloric acid and with sodium hydroxide solution. State symbols are not required. (2)

Ionic equation with hydrochloric acid

Ionic equation with sodium hydroxide solution

(Total for Question 12 = 19 marks)

DO NOT WRITE IN THIS AREA

DO NOT WRITE IN THIS AREA

DO NOT WRITE IN THIS AREA



13 This question is about carboxylic acids.

(a) An organic compound, **T**, contains the elements carbon, hydrogen and oxygen only. **T** contains a carboxylic acid group and one other functional group.

*(i) A sample of compound **T** of mass 2.25 g was burned completely, producing 3.30 g of carbon dioxide and 1.35 g of water. In the mass spectrum of compound **T**, the molecular ion peak is at $m/e = 90$.

Use all the data to calculate the molecular formula of compound **T**.
You **must** show your working.

(6)



(ii) The mass spectrum of compound **T** has a peak at $m/e = 45$.

Give the **displayed formulae** of **two** species that could produce this peak.

(2)

(iii) The low resolution proton nmr spectrum of compound **T** has four peaks with areas in the ratio 1:2:2:1.

Draw the structure of compound **T** and explain how your structure is consistent with the proton nmr data.

(3)

DO NOT WRITE IN THIS AREA

DO NOT WRITE IN THIS AREA

DO NOT WRITE IN THIS AREA

.....

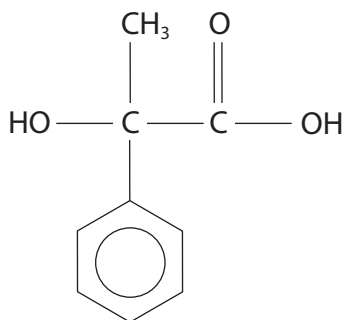
.....

.....

.....



(b) The structure of 2-hydroxy-2-phenylpropanoic acid is shown.



- * (i) Outline how 2-hydroxy-2-phenylpropanoic acid can be synthesised in **three** steps starting from benzene and an acyl chloride.

Include the reagents for each step in the synthesis and draw the structures of the two organic intermediates.

(5)



(ii) Poly(2-hydroxy-2-phenylpropanoic acid) is a possible biodegradable polymer.

Draw a section of this polymer, showing **two** repeat units.

(2)

DO NOT WRITE IN THIS AREA

DO NOT WRITE IN THIS AREA

DO NOT WRITE IN THIS AREA

(Total for Question 13 = 18 marks)



P 5 1 9 4 7 A 0 1 9 3 2

14 This question is about redox reactions.

- (a) Vanadium exists in different oxidation states which can be interconverted using suitable oxidising and reducing agents.

Some relevant standard electrode potentials are shown in the table.

Half-equation	E^\ominus / V
$\text{Zn}^{2+}(\text{aq}) + 2\text{e}^- \rightleftharpoons \text{Zn}(\text{s})$	-0.76
$\text{V}^{3+}(\text{aq}) + \text{e}^- \rightleftharpoons \text{V}^{2+}(\text{aq})$	-0.26
$\text{SO}_4^{2-}(\text{aq}) + 4\text{H}^+(\text{aq}) + 2\text{e}^- \rightleftharpoons \text{SO}_2(\text{aq}) + 2\text{H}_2\text{O}(\text{l})$	+0.17
$\text{VO}^{2+}(\text{aq}) + 2\text{H}^+(\text{aq}) + \text{e}^- \rightleftharpoons \text{V}^{3+}(\text{aq}) + \text{H}_2\text{O}(\text{l})$	+0.34
$\text{Fe}^{3+}(\text{aq}) + \text{e}^- \rightleftharpoons \text{Fe}^{2+}(\text{aq})$	+0.77
$\text{VO}_2^+(\text{aq}) + 2\text{H}^+(\text{aq}) + \text{e}^- \rightleftharpoons \text{VO}^{2+}(\text{aq}) + \text{H}_2\text{O}(\text{l})$	+1.00

- (i) Write the overall half-equation for the oxidation of vanadium(II) ions to the vanadium(V) ions, VO_2^+ . State symbols are not required.

(1)

- (ii) Select, from the table, a reducing agent which should reduce vanadium(V) to vanadium(IV) but not to vanadium(III). Justify your answer.

(3)

.....

.....

.....

.....

.....

.....



(iii) Write the balanced equation for the disproportionation of V^{3+} into V^{2+} and VO^{2+} and explain whether this reaction is feasible under standard conditions. State symbols are not required.

(3)

DO NOT WRITE IN THIS AREA

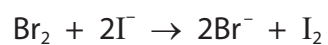
DO NOT WRITE IN THIS AREA

DO NOT WRITE IN THIS AREA

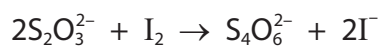


P 5 1 9 4 7 A 0 2 1 3 2

- (b) Excess potassium iodide solution was added to 25.0 cm^3 of an aqueous solution of bromine.



The iodine produced was titrated with sodium thiosulfate solution. All of the iodine required 24.20 cm^3 of $0.100 \text{ mol dm}^{-3}$ sodium thiosulfate solution for reaction.



- (i) Calculate the concentration of the aqueous solution of bromine.

(2)



- (ii) In another experiment, 100.0 cm^3 of the same aqueous solution of bromine was treated directly with 0.00100 moles of sodium thiosulfate.

Excess potassium iodide was then added to the unreacted bromine.

The iodine produced required 16.80 cm^3 of the 0.100 mol dm^{-3} sodium thiosulfate solution for reaction.

Deduce the mole ratio of $\text{S}_2\text{O}_3^{2-} : \text{Br}_2$ and hence write a balanced equation for the reaction between thiosulfate ions and bromine.

State symbols are not required.

(5)

(Total for Question 14 = 14 marks)

TOTAL FOR SECTION B = 51 MARKS



SECTION C

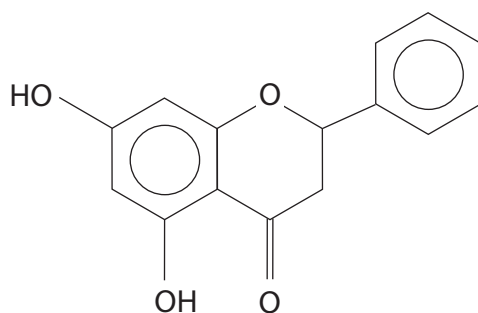
Answer ALL the questions. Write your answers in the spaces provided.

15

Sweeteners

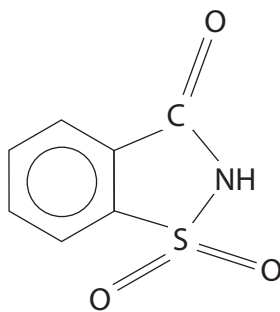
Table sugar (sucrose) contributes to tooth decay and obesity, so some manufacturers add other natural or artificial sweeteners to food.

Honey is a natural sweetener and has about the same relative sweetness as sucrose. The sweetness arises from the simple sugars glucose and fructose. Honey also contains pinocembrin which is an antioxidant.



pinocembrin

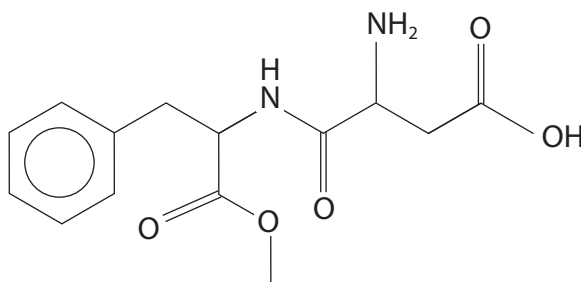
Saccharin is an artificial sweetener, which was first produced in 1879. It is over 300 times sweeter than sucrose.



saccharin

It is normally used as the sodium salt, which is very soluble in water.

Aspartame is an ester of the dipeptide formed from the amino acids phenylalanine and aspartic acid. It was first produced in 1965 and is about 200 times sweeter than sucrose.



aspartame

DO NOT WRITE IN THIS AREA

DO NOT WRITE IN THIS AREA

DO NOT WRITE IN THIS AREA



DO NOT WRITE IN THIS AREA

DO NOT WRITE IN THIS AREA

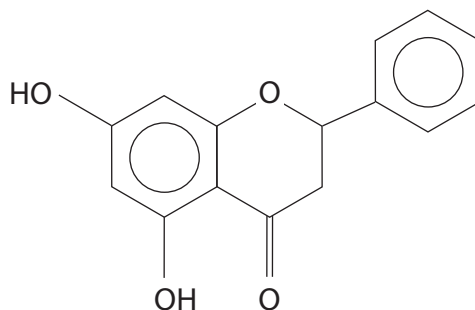
DO NOT WRITE IN THIS AREA

(a) (i) Give the molecular formula for pinocembrin.

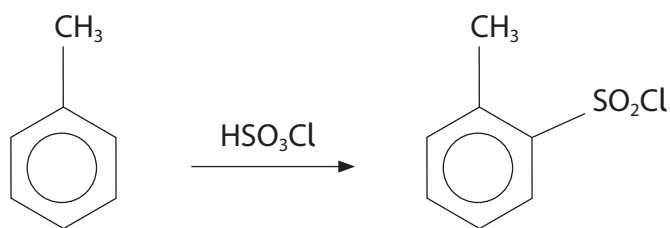
(1)

(ii) Label the chiral carbon atom in pinocembrin with an asterisk (*).

(1)



(b) One route for the synthesis of saccharin starts with the reaction between methylbenzene and chlorosulfonic acid, HSO_3Cl .



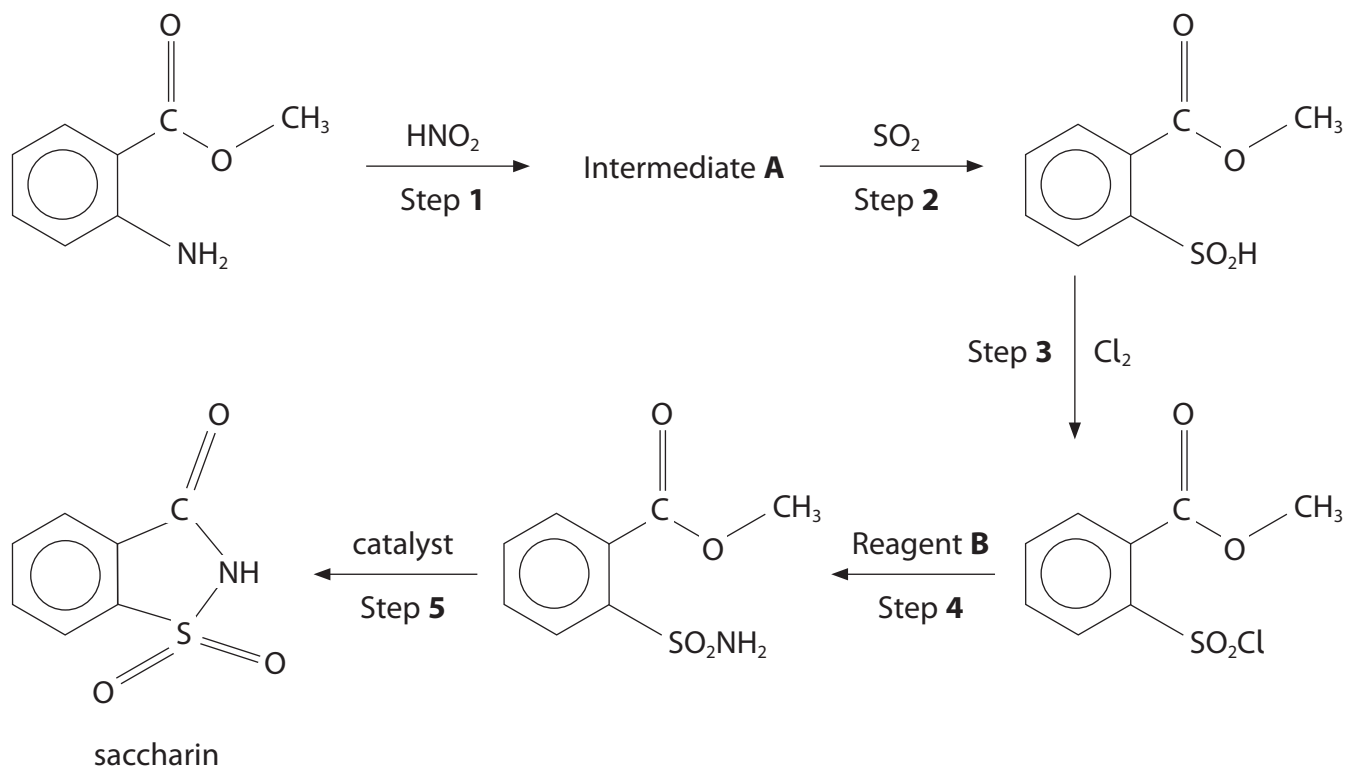
Draw the mechanism for this reaction.

The electrophile is $^+\text{SO}_2\text{Cl}$.

(3)



(c) Another route for the synthesis of saccharin starts with the reaction between methyl 2-aminobenzoate and nitrous acid (prepared from sodium nitrite and hydrochloric acid).



(i) Give the structure of the Intermediate **A**.

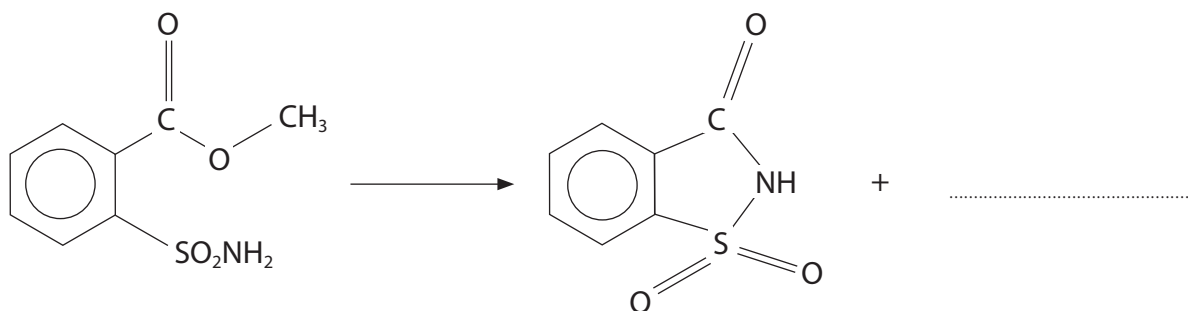
(1)

(ii) Suggest a substance for Reagent **B** in Step 4.

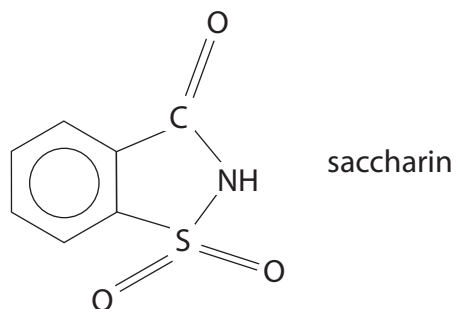
(1)

(iii) Complete the equation for the formation of saccharin in Step 5.

(1)



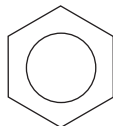
(iv) The sodium salt of saccharin is much more soluble in water than saccharin.



The acidic hydrogen is the one that is attached to the nitrogen atom.

Complete the structure of the sodium salt of saccharin, showing the charges on both ions.

(1)



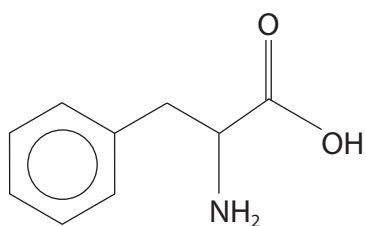
DO NOT WRITE IN THIS AREA

DO NOT WRITE IN THIS AREA

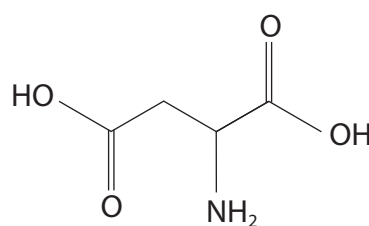
DO NOT WRITE IN THIS AREA



(d) Phenylalanine and aspartic acid are amino acids.



phenylalanine



aspartic acid

- (i) Draw the structure of the organic compound formed when hydrochloric acid is added to phenylalanine.

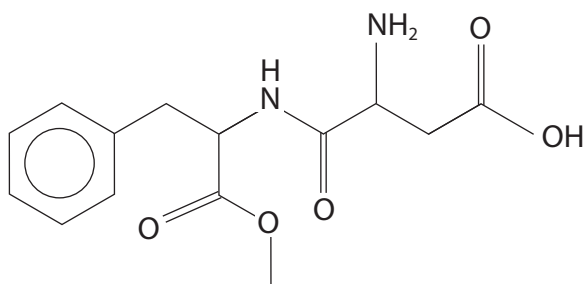
(1)

- (ii) Draw the structure of the organic product formed when **excess** sodium hydroxide solution is added to aspartic acid.

(1)



(iii) The structure of aspartame is



aspartame

Draw the structure of the dipeptide formed between phenylalanine and aspartic acid that is required to form aspartame.

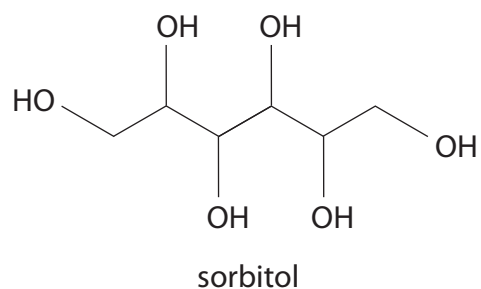
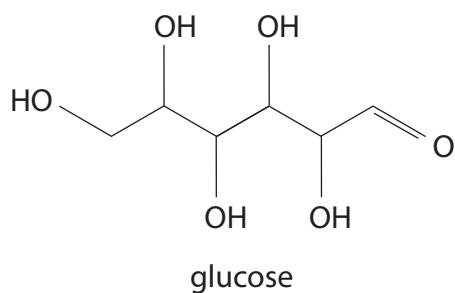
(2)

(iv) Identify, by name or formula, the alcohol needed to form aspartame from the dipeptide in (d)(iii).

(1)



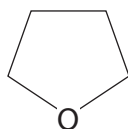
- (e) Sugar alcohols, such as sorbitol, are also used as artificial sweeteners.
Sorbitol is made from glucose.



- (i) State the reagent needed to convert glucose into sorbitol. (1)

- (ii) Describe a chemical test which will distinguish between glucose and sorbitol.
Give the result for each substance. (3)

- (iii) Sorbitol is dehydrated to form sorbitan. Sorbitan contains a ring with four carbon atoms and one oxygen atom. Complete the formula of sorbitan. (1)



(Total for Question 15 = 19 marks)

**TOTAL FOR SECTION C = 19 MARKS
TOTAL FOR PAPER = 90 MARKS**



DO NOT WRITE IN THIS AREA

DO NOT WRITE IN THIS AREA

DO NOT WRITE IN THIS AREA

BLANK PAGE



The Periodic Table of Elements

1 2 3 4 5 6 7 0 (8)
(18)

(1)	(2)	(3)	(4)	(5)	(6)	(7)	(8)	(9)	(10)	(11)	(12)	(13)	(14)	(15)	(16)	(17)	(18)	
6.9 Li lithium 3	9.0 Be beryllium 4	45.0 Sc scandium 21	47.9 Ti titanium 22	50.9 V vanadium 23	52.0 Cr chromium 24	54.9 Mn manganese 25	55.8 Fe iron 26	58.9 Co cobalt 27	58.7 Ni nickel 28	63.5 Cu copper 29	65.4 Zn zinc 30	10.8 B boron 5	12.0 C carbon 6	14.0 N nitrogen 7	16.0 O oxygen 8	19.0 F fluorine 9	4.0 He helium 2	
23.0 Na sodium 11	24.3 Mg magnesium 12	88.9 Y yttrium 39	91.2 Zr zirconium 40	92.9 Nb niobium 41	95.9 Mo molybdenum 42	[98] Tc technetium 43	101.1 Ru ruthenium 44	102.9 Rh rhodium 45	106.4 Pd palladium 46	107.9 Ag silver 47	112.4 Cd cadmium 48	27.0 Al aluminium 13	28.1 Si silicon 14	31.0 P phosphorus 15	32.1 S sulfur 16	35.5 Cl chlorine 17	39.9 Ar argon 18	
39.1 K potassium 19	40.1 Ca calcium 20	85.5 Rb rubidium 37	87.6 Sr strontium 38	180.9 Ta tantalum 73	183.8 W tungsten 74	186.2 Re rhenium 75	190.2 Os osmium 76	192.2 Ir iridium 77	195.1 Pt platinum 78	197.0 Au gold 79	200.6 Hg mercury 80	69.7 Ga gallium 31	72.6 Ge germanium 32	74.9 As arsenic 33	79.0 Se selenium 34	79.9 Br bromine 35	83.8 Kr krypton 36	
132.9 Cs caesium 55	137.3 Ba barium 56	138.9 La* lanthanum 57	178.5 Hf hafnium 72	180.9 Ta tantalum 73	183.8 W tungsten 74	186.2 Re rhenium 75	190.2 Os osmium 76	192.2 Ir iridium 77	195.1 Pt platinum 78	197.0 Au gold 79	200.6 Hg mercury 80	114.8 In indium 49	118.7 Sn tin 50	121.8 Sb antimony 51	127.6 Te tellurium 52	126.9 I iodine 53	131.3 Xe xenon 54	
[223] Fr francium 87	[226] Ra radium 88	[227] Ac* actinium 89	[261] Rf rutherfordium 104	[262] Db dubnium 105	[266] Sg seaborgium 106	[264] Bh bohrium 107	[277] Hs hassium 108	[268] Mt meitnerium 109	[271] Ds darmstadtium 110	[272] Rg roentgenium 111	Elements with atomic numbers 112-116 have been reported but not fully authenticated							
* Lanthanide series																		
* Actinide series																		
140 Ce cerium 58	141 Pr praseodymium 59	144 Nd neodymium 60	147 Pm promethium 61	150 Sm samarium 62	152 Eu europium 63	157 Gd gadolinium 64	159 Tb terbium 65	163 Dy dysprosium 66	165 Ho holmium 67	167 Er erbium 68	169 Tm thulium 69	173 Yb ytterbium 70	175 Lu lutetium 71	232 Th thorium 90	238 Pa protactinium 91	238 U uranium 92	93 Np neptunium 93	
94 Pu plutonium 94	95 Am americium 95	96 Cm curium 96	97 Bk berkelium 97	98 Cf californium 98	99 Es einsteinium 99	100 Fm fermium 100	101 Md mendelevium 101	102 No nobelium 102	103 Lr lawrencium 103	[254] Uuo ununoctium 118	[255] Uuuh ununhexium 115	[256] Uuuh ununhexium 116	[257] Uuuh ununhexium 117	[258] Uuuh ununhexium 118	[259] Uuuh ununhexium 119	[260] Uuuh ununhexium 120	[261] Uuuh ununhexium 121	

* Lanthanide series

* Actinide series

Elements with atomic numbers 112-116 have been reported but not fully authenticated

DO NOT WRITE IN THIS AREA

DO NOT WRITE IN THIS AREA

DO NOT WRITE IN THIS AREA

