

Write your name here

Surname

Other names

**Pearson Edexcel**  
**International**  
**Advanced Level**

Centre Number

--	--	--	--	--	--

Candidate Number

--	--	--	--	--

# Core Mathematics C12

## Advanced Subsidiary

Monday 13 January 2014 – Morning  
**Time: 2 hours 30 minutes**

Paper Reference

**WMA01/01****You must have:**

Mathematical Formulae and Statistical Tables (Blue)

Total Marks

--

**Candidates may use any calculator allowed by the regulations of the Joint Council for Qualifications. Calculators must not have the facility for symbolic algebra manipulation, differentiation and integration, or have retrievable mathematical formulae stored in them.**

**Instructions**

- Use **black** ink or ball-point pen.
- If pencil is used for diagrams/sketches/graphs it must be dark (HB or B). Coloured pencils and highlighter pens must not be used.
- **Fill in the boxes** at the top of this page with your name, centre number and candidate number.
- Answer **all** questions and ensure that your answers to parts of questions are clearly labelled.
- Answer the questions in the spaces provided – *there may be more space than you need.*
- You should show sufficient working to make your methods clear. Answers without working may not gain full credit.
- When a calculator is used, the answer should be given to an appropriate degree of accuracy.

**Information**

- The total mark for this paper is 125.
- The marks for **each** question are shown in brackets – *use this as a guide as to how much time to spend on each question.*

**Advice**

- Read each question carefully before you start to answer it.
- Try to answer every question.
- Check your answers if you have time at the end.

Turn over ►

P43231A

©2014 Pearson Education Ltd.

5/5/5/


**PEARSON**



Leave  
blank

**Question 1 continued**

Lined area for writing answers.

**(Total 4 marks)**

**Q1**







3.

$$f(x) = 10x^3 + 27x^2 - 13x - 12$$

(a) Find the remainder when  $f(x)$  is divided by

(i)  $x - 2$

(ii)  $x + 3$

**(3)**

(b) Hence factorise  $f(x)$  completely.

**(4)**

---

---

---

---

---

---

---

---

---

---

---

---

---

---

---

---

---

---

---

---

---

---

---

---

---

---





4. Answer this question without the use of a calculator and show all your working.

(i) Show that

$$\frac{4}{2\sqrt{2} - \sqrt{6}} = 2\sqrt{2}(2 + \sqrt{3})$$

**(4)**

(ii) Show that

$$\sqrt{27} + \sqrt{21} \times \sqrt{7} - \frac{6}{\sqrt{3}} = 8\sqrt{3}$$

**(3)**

---

---

---

---

---

---

---

---

---

---

---

---

---

---

---

---

---

---

---

---

---

---

---

---

---

---

---









**Question 5 continued**

Lined area for writing the answer to Question 5.

**(Total 7 marks)**

Q5





**Question 6 continued**

Lined area for writing the answer to Question 6.

**Q6**

**(Total 6 marks)**











Leave blank

**Question 8 continued**

Lined area for writing the answer to Question 8. The area contains 30 horizontal lines.

**(Total 7 marks)**

**Q8**











10. The curve  $C$  has equation  $y = \cos\left(x - \frac{\pi}{3}\right)$ ,  $0 \leq x \leq 2\pi$

(a) In the space below, sketch the curve  $C$ .

(2)

(b) Write down the exact coordinates of the points at which  $C$  meets the coordinate axes.

(3)

(c) Solve, for  $x$  in the interval  $0 \leq x \leq 2\pi$ ,

$$\cos\left(x - \frac{\pi}{3}\right) = \frac{1}{\sqrt{2}}$$

giving your answers in the form  $k\pi$ , where  $k$  is a rational number.

(4)















12.

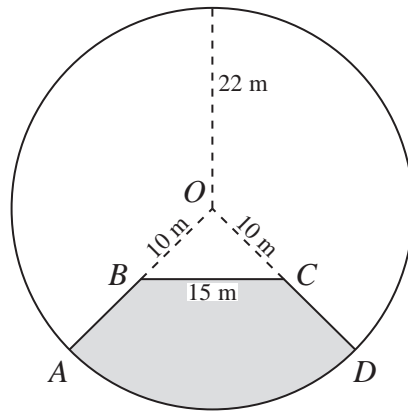


Diagram NOT drawn to scale

Figure 1

Figure 1 shows the plan for a pond and platform. The platform is shown shaded in the figure and is labelled  $ABCD$ .

The pond and platform together form a circle of radius 22 m with centre  $O$ .

$OA$  and  $OD$  are radii of the circle. Point  $B$  lies on  $OA$  such that the length of  $OB$  is 10 m and point  $C$  lies on  $OD$  such that the length of  $OC$  is 10 m. The length of  $BC$  is 15 m.

The platform is bounded by the arc  $AD$  of the circle, and the straight lines  $AB$ ,  $BC$  and  $CD$ .

Find

- (a) the size of the angle  $BOC$ , giving your answer in radians to 3 decimal places, (3)
- (b) the perimeter of the platform to 3 significant figures, (4)
- (c) the area of the platform to 3 significant figures. (4)

---

---

---

---

---

---

---

---

---

---

---

---

---

---

---

---

---

---

---

---

---

---

---

---







Leave  
blank

**Question 12 continued**

Handwriting practice area consisting of multiple horizontal lines.

**Q12**

**(Total 11 marks)**

--	--



13. The curve  $C$  has equation

$$y = \frac{(x-3)(3x-25)}{x}, \quad x > 0$$

(a) Find  $\frac{dy}{dx}$  in a fully simplified form.

(3)

(b) Hence find the coordinates of the turning point on the curve  $C$ .

(4)

(c) Determine whether this turning point is a minimum or maximum, justifying your answer.

(2)

The point  $P$ , with  $x$  coordinate  $2\frac{1}{2}$ , lies on the curve  $C$ .

(d) Find the equation of the normal at  $P$ , in the form  $ax + by + c = 0$ , where  $a$ ,  $b$  and  $c$  are integers.

(5)

---

---

---

---

---

---

---

---

---

---

---

---

---

---

---

---

---

---

---

---

---

---

---

---

---





**Question 13 continued**

Lined writing area for the answer to Question 13 continued.



P 4 3 2 3 1 A 0 3 3 4 4





14.

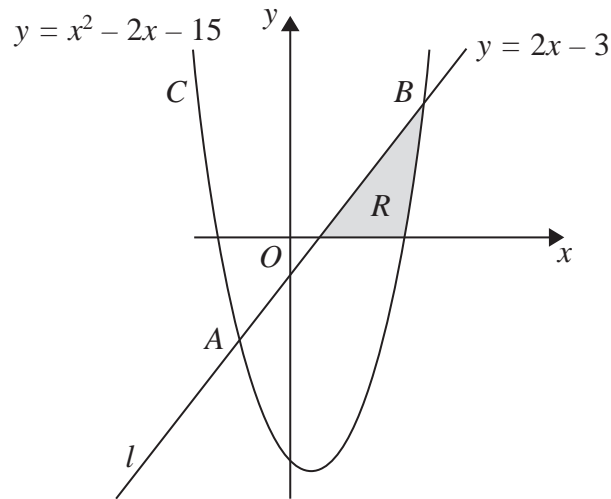
Diagram **NOT**  
drawn to scale**Figure 2**

Figure 2 shows part of the line  $l$  with equation  $y = 2x - 3$  and part of the curve  $C$  with equation  $y = x^2 - 2x - 15$

The line  $l$  and the curve  $C$  intersect at the points  $A$  and  $B$  as shown.

(a) Use algebra to find the coordinates of  $A$  and the coordinates of  $B$ .

**(5)**

In Figure 2, the shaded region  $R$  is bounded by the line  $l$ , the curve  $C$  and the positive  $x$ -axis.

(b) Use integration to calculate an exact value for the area of  $R$ .

**(7)**


---



---



---



---



---



---



---



---



---



---



---



---



---



---



---



---



---



---



---



---



---



---

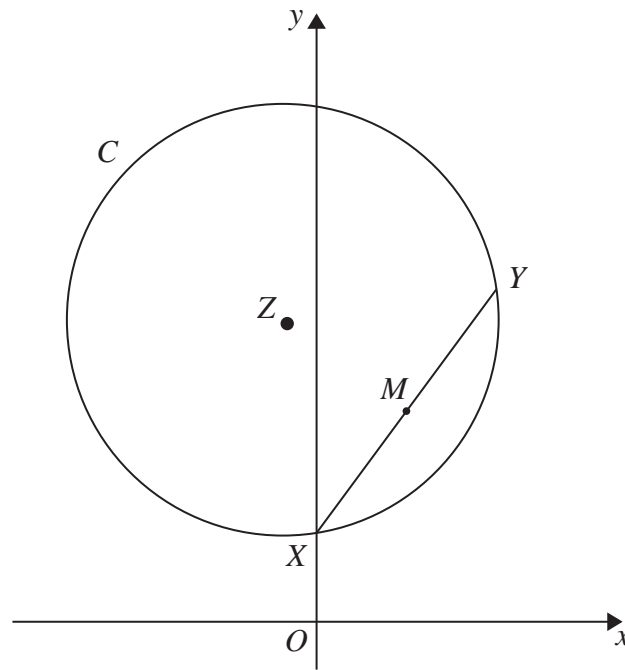








15.

Diagram **NOT**  
drawn to scale**Figure 3**

The points  $X$  and  $Y$  have coordinates  $(0, 3)$  and  $(6, 11)$  respectively.  $XY$  is a chord of a circle  $C$  with centre  $Z$ , as shown in Figure 3.

- (a) Find the gradient of  $XY$ . (2)

The point  $M$  is the midpoint of  $XY$ .

- (b) Find an equation for the line which passes through  $Z$  and  $M$ . (5)

Given that the  $y$  coordinate of  $Z$  is 10,

- (c) find the  $x$  coordinate of  $Z$ , (2)

- (d) find the equation of the circle  $C$ , giving your answer in the form

$$x^2 + y^2 + ax + by + c = 0$$

where  $a$ ,  $b$  and  $c$  are constants. (5)

---



---



---



---



---



---





**Question 15 continued**

Ruled lines for writing.





**Question 15 continued**

Ruled writing area with horizontal lines.



