

Please check the examination details below before entering your candidate information

Candidate surname

Other names

Pearson Edexcel
International
Advanced Level

Centre Number

--	--	--	--	--

Candidate Number

--	--	--	--	--

Sample Assessment Materials for first teaching September 2018

(Time: 1 hour 30 minutes)

Paper Reference **WME01/01**

Mathematics

International Advanced Subsidiary/Advanced Level
Mechanics M1

You must have:

Mathematical Formulae and Statistical Tables, calculator

Total Marks

Candidates may use any calculator permitted by Pearson regulations. Calculators must not have the facility for symbolic algebra manipulation, differentiation and integration, or have retrievable mathematical formulae stored in them.

Instructions

- Use **black** ink or ball-point pen.
- If pencil is used for diagrams/sketches/graphs it must be dark (HB or B).
- **Fill in the boxes** at the top of this page with your name, centre number and candidate number.
- Answer **all** questions and ensure that your answers to parts of questions are clearly labelled.
- Answer the questions in the spaces provided
– *there may be more space than you need.*
- You should show sufficient working to make your methods clear. Answers without working may not gain full credit.
- Inexact answers should be given to three significant figures unless otherwise stated.

Information

- A booklet 'Mathematical Formulae and Statistical Tables' is provided.
- There are 7 questions in this question paper. The total mark for this paper is 75.
- The marks for each question are shown in brackets
– *use this as a guide as to how much time to spend on each question.*

Advice

- Read each question carefully before you start to answer it.
- Try to answer every question.
- Check your answers if you have time at the end.
- If you change your mind about an answer, cross it out and put your new answer and any working underneath.

Turn over

S59761A

©2018 Pearson Education Ltd.

1/1/1/1/1/




Pearson

Leave blank

Answer ALL questions. Write your answers in the spaces provided.

DO NOT WRITE IN THIS AREA

DO NOT WRITE IN THIS AREA

DO NOT WRITE IN THIS AREA

Unless otherwise indicated, whenever a numerical value of g is required, take $g = 9.8 \text{ m s}^{-2}$ and give your answer to either 2 significant figures or 3 significant figures.

1. A car is moving along a straight horizontal road with constant acceleration $a \text{ m s}^{-2}$ ($a > 0$). At time $t = 0$ the car passes the point P moving with speed $u \text{ m s}^{-1}$. In the next 4 s, the car travels 76 m and then in the following 6 s it travels a further 219 m.

Find

- (i) the value of u ,
- (ii) the value of a .

(7)

Question 1 continued

DO NOT WRITE IN THIS AREA

DO NOT WRITE IN THIS AREA

DO NOT WRITE IN THIS AREA

Lined writing area with 30 horizontal lines.

(Total for Question 1 is 7 marks)

Q1

2. Two particles P and Q are moving in opposite directions along the same horizontal straight line. Particle P has mass m and particle Q has mass km . The particles collide directly. Immediately before the collision, the speed of P is u and the speed of Q is $2u$. As a result of the collision, the direction of motion of each particle is reversed and the speed of each particle is halved.

(a) Find the value of k . (4)

(b) Find, in terms of m and u only, the magnitude of the impulse exerted on Q by P in the collision. (2)

DO NOT WRITE IN THIS AREA

DO NOT WRITE IN THIS AREA

DO NOT WRITE IN THIS AREA

DO NOT WRITE IN THIS AREA

DO NOT WRITE IN THIS AREA

DO NOT WRITE IN THIS AREA

Question 2 continued

(Total for Question 2 is 6 marks)

Q2
[]

Leave
blank

DO NOT WRITE IN THIS AREA

DO NOT WRITE IN THIS AREA

DO NOT WRITE IN THIS AREA

Question 3 continued

Lined writing area with horizontal lines for answers.

Leave blank

Question 3 continued

(Total for Question 3 is 10 marks)

Q3

--	--

DO NOT WRITE IN THIS AREA

4.

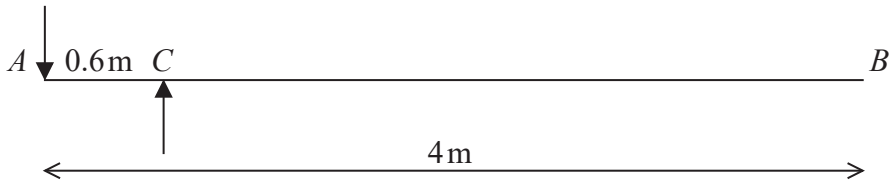


Figure 1

A diving board AB consists of a wooden plank of length 4m and mass 30kg. The plank is held at rest in a horizontal position by two supports at the points A and C , where $AC = 0.6$ m, as shown in Figure 1. The force on the plank at A acts vertically downwards and the force on the plank at C acts vertically upwards.

A diver of mass 50 kg is standing on the board at the end B . The diver is modelled as a particle and the plank is modelled as a uniform rod. The plank is in equilibrium.

- (a) Find
- (i) the magnitude of the force acting on the plank at A ,
 - (ii) the magnitude of the force acting on the plank at C .
- (6)**

The support at A will break if subjected to a force whose magnitude is greater than 5000 N.

- (b) Find, in kg, the greatest integer mass of a diver who can stand on the board at B without breaking the support at A .
- (3)**

- (c) Explain how you have used the fact that the diver is modelled as a particle.
- (1)**

DO NOT WRITE IN THIS AREA

DO NOT WRITE IN THIS AREA

DO NOT WRITE IN THIS AREA

Leave blank

6.




Figure 2

Two cars, A and B , move on parallel straight horizontal tracks. Initially A and B are both at rest with A at the point P and B at the point Q , as shown in Figure 2. At time $t = 0$ seconds, A starts to move with constant acceleration $a \text{ m s}^{-2}$ for 3.5 s , reaching a speed of 14 m s^{-1} . Car A then moves with constant speed 14 m s^{-1} .

(a) Find the value of a . (2)

Car B also starts to move at time $t = 0$ seconds, in the same direction as car A . Car B moves with a constant acceleration of 3 m s^{-2} . At time $t = T$ seconds, B overtakes A . At this instant A is moving with constant speed.

(b) On a diagram, sketch, on the same axes, a speed-time graph for the motion of A for the interval $0 \leq t \leq T$ and a speed-time graph for the motion of B for the interval $0 \leq t \leq T$. (3)

(c) Find the value of T . (8)

(d) Find the distance of car B from the point Q when B overtakes A . (1)

(e) On a new diagram, sketch, on the same axes, an acceleration-time graph for the motion of A for the interval $0 \leq t \leq T$ and an acceleration-time graph for the motion of B for the interval $0 \leq t \leq T$. (3)

DO NOT WRITE IN THIS AREA

DO NOT WRITE IN THIS AREA

DO NOT WRITE IN THIS AREA

Leave blank

Question 6 continued

A series of horizontal lines for writing the answer to Question 6.

DO NOT WRITE IN THIS AREA

DO NOT WRITE IN THIS AREA

DO NOT WRITE IN THIS AREA

7.

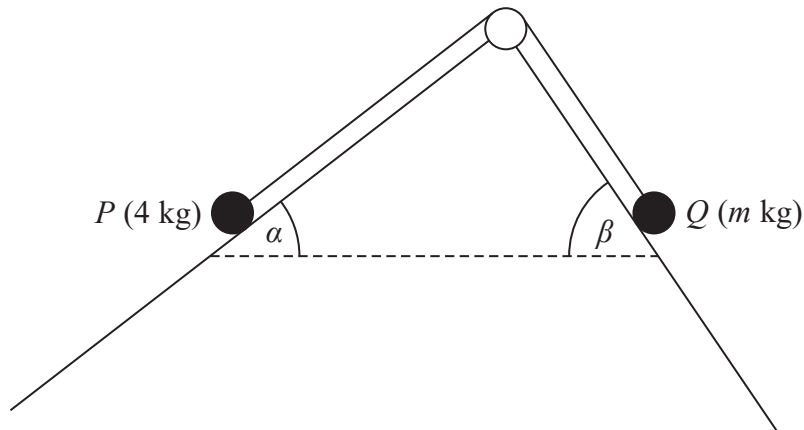


Figure 3

A particle P of mass 4 kg is attached to one end of a light inextensible string. A particle Q of mass m kg is attached to the other end of the string. The string passes over a small smooth pulley which is fixed at a point on the intersection of two fixed inclined planes. The string lies in a vertical plane that contains a line of greatest slope of each of the two inclined planes. The first plane is inclined to the horizontal at an angle α , where $\tan \alpha = \frac{3}{4}$ and the second plane is inclined to the horizontal at an angle β , where $\tan \beta = \frac{4}{3}$. Particle P is on the first plane and particle Q is on the second plane with the string taut, as shown in Figure 3.

The first plane is rough and the coefficient of friction between P and the plane is $\frac{1}{4}$. The second plane is smooth. The system is in limiting equilibrium.

Given that P is on the point of slipping down the first plane,

(a) find the value of m , (10)

(b) find the magnitude of the force exerted on the pulley by the string, (4)

(c) find the direction of the force exerted on the pulley by the string. (1)

Question 7 continued

Handwriting practice area consisting of 24 horizontal lines.

DO NOT WRITE IN THIS AREA

DO NOT WRITE IN THIS AREA

DO NOT WRITE IN THIS AREA

Question 7 continued

DO NOT WRITE IN THIS AREA

DO NOT WRITE IN THIS AREA

DO NOT WRITE IN THIS AREA

Leave blank

DO NOT WRITE IN THIS AREA

DO NOT WRITE IN THIS AREA

DO NOT WRITE IN THIS AREA

Question 7 continued

Ruled writing area for question 7 continued.

(Total for Question 7 is 15 marks)

Q7

TOTAL FOR PAPER IS 75 MARKS