

Write your name here

Surname

Other names

Centre Number

Candidate Number

Pearson Edexcel
International GCSE (9-1)

Biology

Paper 1

Sample Assessment Materials for first teaching September 2017

Time: 2 hours

Paper Reference

4BI1/1B
4SD0/1B
You must have:

Calculator, ruler

Total Marks

Instructions

- Use **black** ink or ball-point pen.
- **Fill in the boxes** at the top of this page with your name, centre number and candidate number.
- Answer **all** questions.
- Answer the questions in the spaces provided
– *there may be more space than you need.*
- Calculators may be used.
- Some questions must be answered with a cross in a box ☒. If you change your mind about an answer, put a line through the box ☒ and then mark your new answer with a cross ☒.

Information

- The total mark for this paper is 110.
- The marks for **each** question are shown in brackets
– *use this as a guide as to how much time to spend on each question.*

Advice

- Read each question carefully before you start to answer it.
- Try to answer every question.
- Check your answers if you have time at the end.

Turn over ►

S52913A

©2016 Pearson Education Ltd.


PEARSON

Answer ALL questions. Write your answers in the spaces provided.

1 The diagram shows a pot containing yoghurt and fruit.



(a) Describe how a named bacterium produced this yoghurt from milk.

(3)

.....

.....

.....

.....

.....

.....

(b) Suggest the health benefits to a human of adding fruit to the yoghurt.

(2)

.....

.....

.....

.....

(Total for Question 1 = 5 marks)


DO NOT WRITE IN THIS AREA

DO NOT WRITE IN THIS AREA

DO NOT WRITE IN THIS AREA

2 A rhino is a large mammal that lives in hot parts of Africa.

The drawing shows a rhino.



(a) The rhino feeds on plants and rests in the shade during the day.

(i) Which of the following describes the trophic level of a rhino?

(1)

- A producer
- B primary consumer
- C secondary consumer
- D tertiary consumer

(ii) Which of the following explains why the rhino rests in the shade during the day?

(1)

- A it has a large surface area to volume ratio and needs to avoid overheating.
- B it has a large surface area to volume ratio and needs to gain heat.
- C it has a small surface area to volume ratio and needs to avoid overheating.
- D it has a small surface area to volume ratio and needs to gain heat.

(b) The horn of the rhino is valuable in some human cultures. This results in rhinos being killed just for their horn.

This species is at risk of extinction because the mean rate of killing is one rhino every six hours.

In 2016, there were an estimated 25 000 of one species of rhino in Africa.

Calculate the year in which this rhino species would become extinct, assuming the number of births equals the number of natural deaths.

(3)

year =

(c) In an effort to protect the rhino from extinction, scientists have produced a heart rate monitor.

The monitor is attached to the rhino. It sends an alarm signal to the nearest police station if the rhino is under stress.

This allows the police to respond quickly to save the rhino from being killed.

(i) Explain how stress affects the heart rate of a rhino.

(2)

.....
.....
.....
.....

(ii) Describe the evidence the scientists need to find out if this method helps to protect the rhino from extinction.

(2)

.....
.....
.....
.....

(Total for Question 2 = 9 marks)

(ii) Give **two** ways in which the design of the study could be improved.

(2)

1

.....

2

.....

(b) The diameter of a capillary is 8.0 μm and the diameter of the aorta is 25.0 mm.
1000 μm = 1 mm.

(i) Calculate the ratio of the diameter of the aorta to the diameter of the capillary.
Show your working.

(2)

ratio =

(ii) Explain why the aorta has a thicker wall than the capillary.

(2)

.....

.....

.....

.....

.....

.....

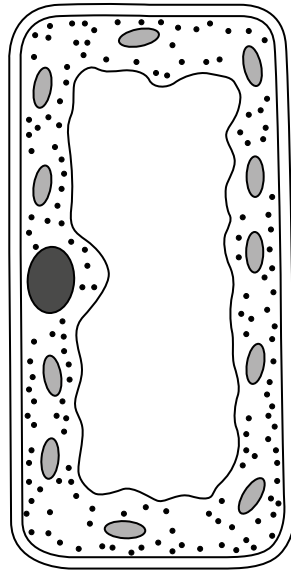
(Total for Question 3 = 11 marks)

DO NOT WRITE IN THIS AREA

DO NOT WRITE IN THIS AREA

DO NOT WRITE IN THIS AREA

4 The diagram shows a cell.



(a) (i) Which type of cell does the diagram show?

(1)

- A an animal
- B a bacterium
- C a fungus
- D a plant

(ii) The statements below describe conditions required for some molecules to move into this cell.

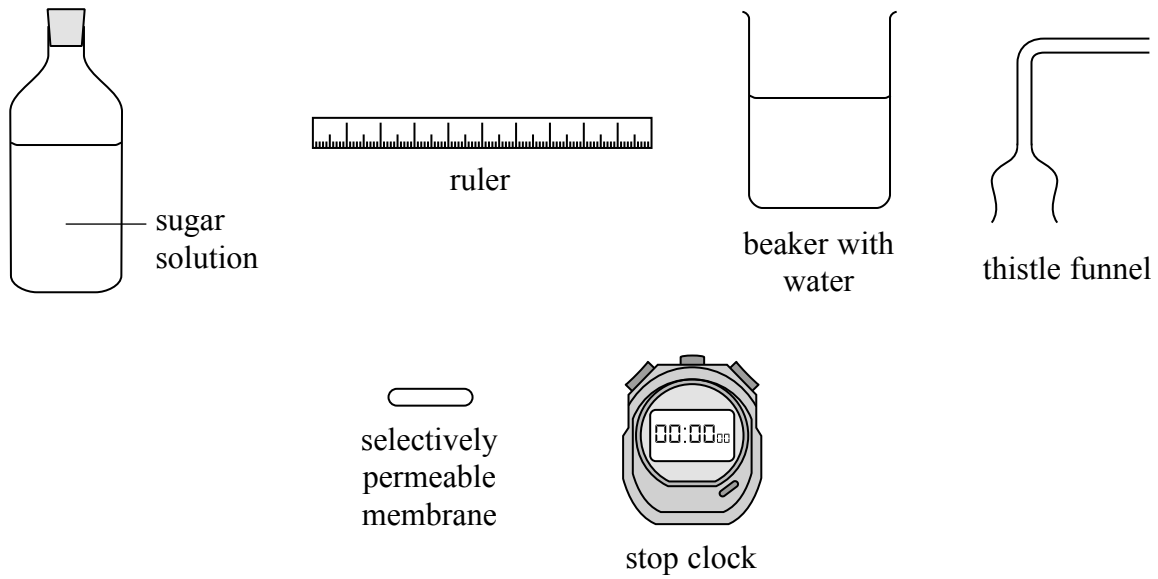
1. a concentration gradient
2. use of ATP

Which of these statements is correct for the process for osmosis?

(1)

- A 1 only
- B 2 only
- C 1 and 2
- D neither 1 nor 2

(b) The diagram shows some of the apparatus used to investigate the rate of osmosis.



In the space below draw a labelled diagram to show how you would put this apparatus together to investigate the rate of osmosis.

(4)

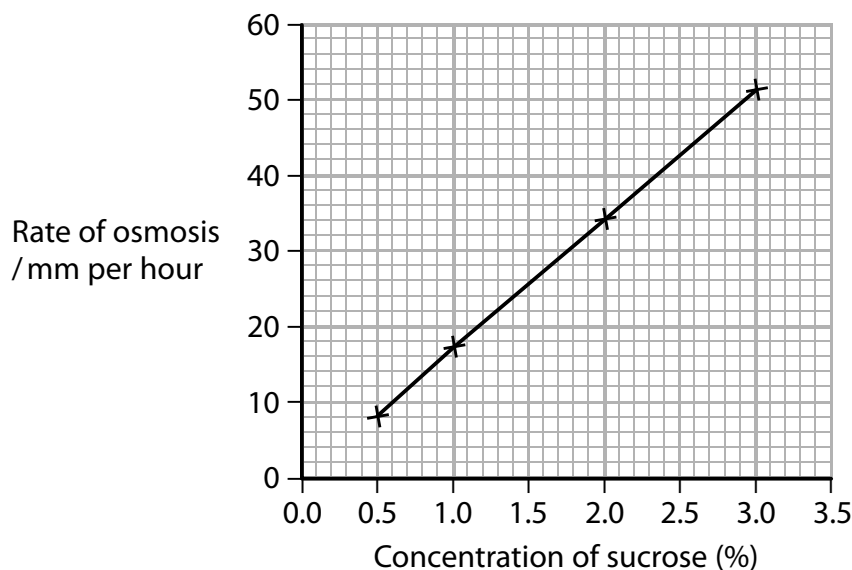
DO NOT WRITE IN THIS AREA

DO NOT WRITE IN THIS AREA

DO NOT WRITE IN THIS AREA

- (c) The apparatus is used to find out the effect of different sucrose concentrations on the rate of osmosis.

The graph below shows the results.



Calculate, using information from the graph, the rate of osmosis in mm per minute that would occur for a sucrose concentration of 2.5%.

Show your working.

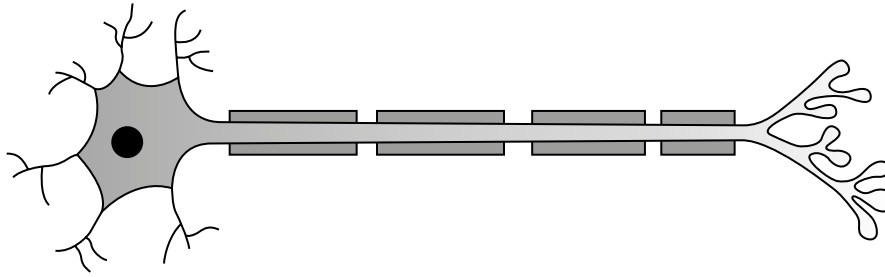
(2)

rate of osmosis = mm per minute

(Total for Question 4 = 8 marks)

5 Electrical impulses pass along motor neurones to effectors.

(a) The diagram shows a motor neurone.



The neurone is stimulated by a neurotransmitter to pass an electrical impulse along its length.

(i) Draw a circle around the part of the neurone that is stimulated by the neurotransmitter. (1)

(ii) The longest motor neurone in the human body passes electrical impulses from the base of the spinal cord to muscle in the big toe. This neurone can be up to 1.3 m in length.

An impulse passes along this neurone at a speed of 1.20×10^2 metres per second.

Calculate the time taken, in seconds, for an impulse to pass along this neurone. (2)

time = s

(iii) All neurones need a supply of energy from respiration.

Name the organelle in this motor neurone that supplies energy. (1)

DO NOT WRITE IN THIS AREA

DO NOT WRITE IN THIS AREA

DO NOT WRITE IN THIS AREA

DO NOT WRITE IN THIS AREA

DO NOT WRITE IN THIS AREA

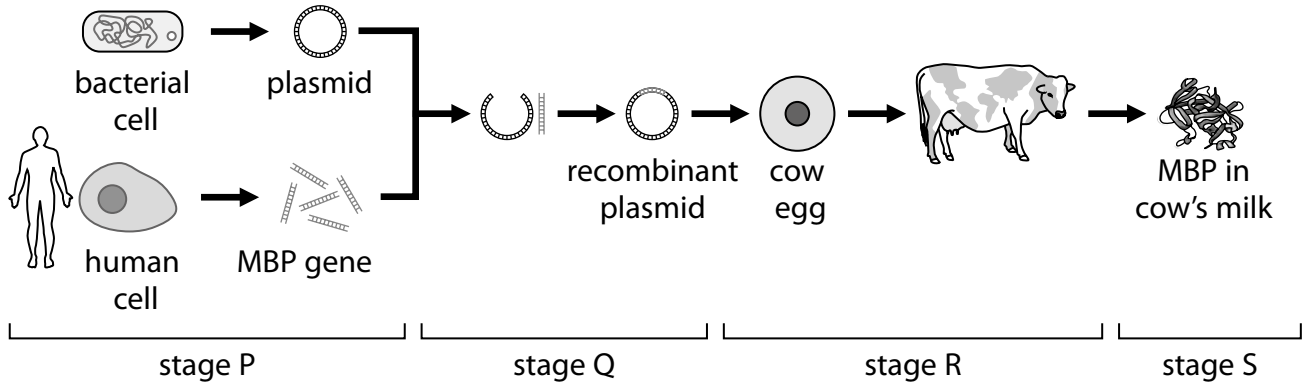
DO NOT WRITE IN THIS AREA

(b) Multiple sclerosis is a disorder in which the insulating layer that surrounds a neurone is gradually destroyed. This prevents the passage of electrical impulses.

Scientists hope to treat multiple sclerosis using a protein called myelin basic protein (MBP).

Transgenic cows can produce large quantities of MBP in their milk.

The diagram shows four stages in the process of creating transgenic cows.



(i) Name the **two** structures in the bacterium that contain DNA.

(2)

- 1.....
- 2.....

(ii) Name the stage that involves the use of ligase.

(1)

.....

(iii) Name the stage that involves placing a transgenic embryo into a uterus.

(1)

.....

(Total for Question 5 = 8 marks)

6 Car exhaust fumes contain air pollutants including carbon monoxide and sulfur dioxide.

(a) Explain why carbon monoxide is a harmful air pollutant.

(2)

.....

.....

.....

.....

(b) Which of the following is a direct consequence of sulfur dioxide pollution?

(1)

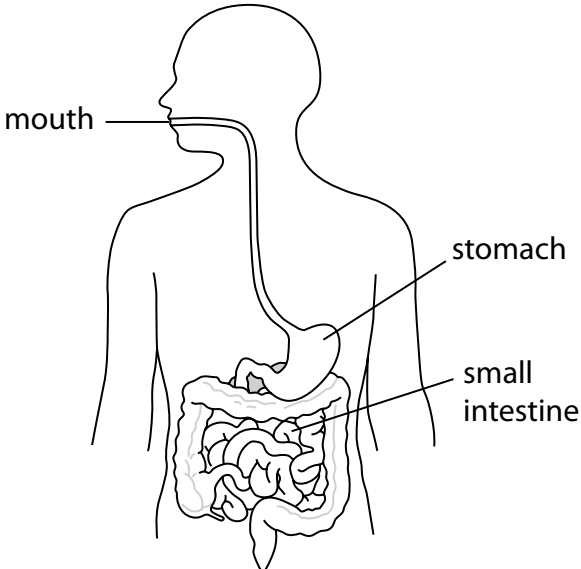
- A production of acid rain
- B soil erosion
- C production of ozone
- D eutrophication

DO NOT WRITE IN THIS AREA

DO NOT WRITE IN THIS AREA

DO NOT WRITE IN THIS AREA

7 The diagram shows parts of the human digestive system.



(a) Describe how food passes from the mouth to the stomach.

(2)

.....

.....

.....

.....

(b) Explain what happens to protein in the stomach.

(4)

.....

.....

.....

.....

.....

.....

.....

.....

DO NOT WRITE IN THIS AREA

DO NOT WRITE IN THIS AREA

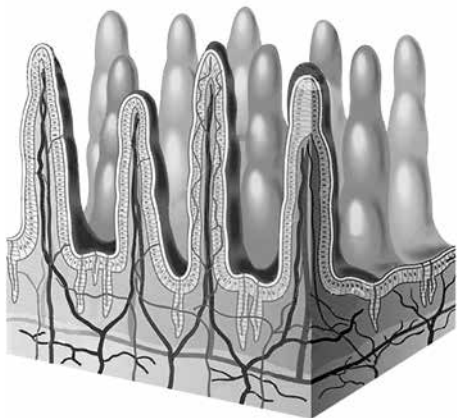
DO NOT WRITE IN THIS AREA

(c) Gluten is a protein found in wheat.

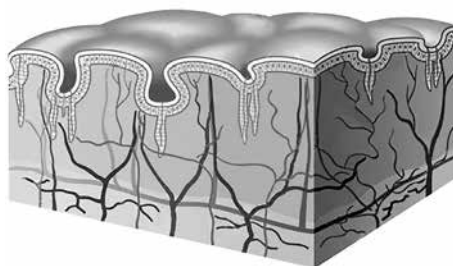
In some people, the lining of the small intestine can be damaged by gluten. This causes a condition called coeliac disease.

The diagram shows the lining of the small intestine of a child unaffected by gluten and a child with coeliac disease.

Unaffected



Coeliac disease



Suggest how coeliac disease could affect the growth of a child.

(4)

Area with horizontal dotted lines for writing the answer.

(Total for Question 7 = 10 marks)

DO NOT WRITE IN THIS AREA

DO NOT WRITE IN THIS AREA

DO NOT WRITE IN THIS AREA

- 8 Male infertility can be caused by reduced sperm production and reduced sperm movement.

Scientists investigated the effect of a drug called letrozole on male infertility.

A large group of infertile men was divided into two smaller groups.

Group 1 received 2.5 mg of letrozole per day for six months and Group 2 received no treatment.

The scientists measured the following at the start of the investigation and after six months:

- sperm concentration
- percentage of moving sperm
- blood testosterone level
- blood oestrogen level
- side effects such as hair loss and skin rash

The table below shows the results.

Factors measured	Group 1 (letrozole)		Group 2 (no treatment)	
	start	after 6 months	start	after 6 months
sperm concentration / number per cm ³	450	1.4×10^6	475	450
percentage of moving sperm	2	18	2	2
blood testosterone level / arbitrary units	249	1198	266	266
blood oestrogen level / arbitrary units	44	0	44	48
number of men with side effects	0	8	0	0

The scientists concluded that letrozole is a safe and effective treatment for male infertility.

Evaluate this conclusion.

(6)

DO NOT WRITE IN THIS AREA

DO NOT WRITE IN THIS AREA

DO NOT WRITE IN THIS AREA

(Total for Question 8 = 6 marks)

9 Genetic conditions can be controlled by dominant alleles or by recessive alleles.

(a) Explain **one** difference between a dominant allele and a recessive allele.

(2)

.....

.....

.....

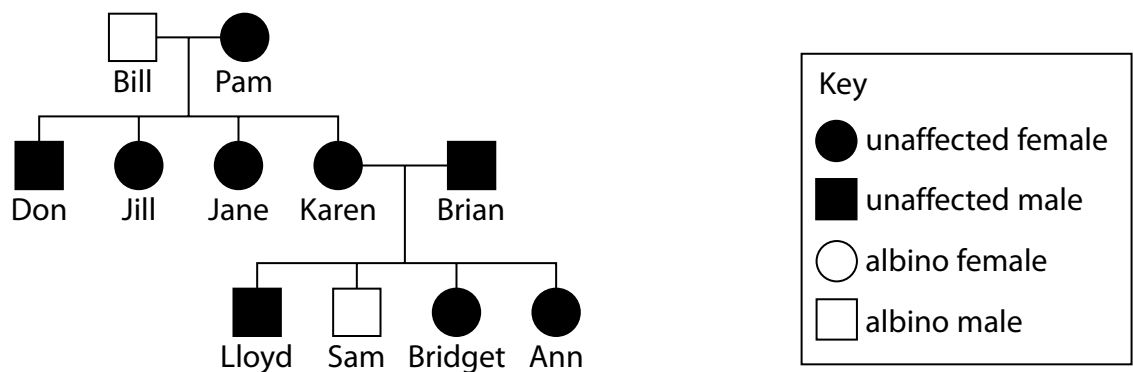
.....

.....

.....

(b) Pedigree analysis can be used to find out if characteristics are controlled by dominant or recessive alleles.

The diagram below shows a family pedigree for albinism.



DO NOT WRITE IN THIS AREA

DO NOT WRITE IN THIS AREA

DO NOT WRITE IN THIS AREA

Explain, using information in the pedigree, whether albinism is controlled by a recessive allele or a dominant allele.

(3)

.....

.....

.....

.....

.....

.....

.....

- (c) Sickle cell anaemia is a genetic condition that results in the formation of abnormal red blood cells.

Sickle cell anaemia is controlled by a gene with two alleles. The allele (N) produces normal red blood cells and the allele (n) produces abnormal red blood cells.

Two parents who are both heterozygous plan to have children.

Use a genetic diagram to show the parent genotypes, the gametes produced and all the possible genotypes and phenotypes of their offspring.

(3)

Parent genotypes

Gametes

Offspring genotypes

Offspring phenotypes

(d) Individuals who are heterozygous for sickle cell anaemia are protected from malaria.

Suggest how this would affect the number of individuals born with sickle cell anaemia in parts of the world where malaria is common.

(4)

.....

.....

.....

.....

.....

.....

.....

.....

.....

.....

(Total for Question 9 = 12 marks)

DO NOT WRITE IN THIS AREA

DO NOT WRITE IN THIS AREA

DO NOT WRITE IN THIS AREA

10 Plants make sugars by the process of photosynthesis.

(a) (i) Which of the following factors is least likely to limit the rate of photosynthesis? (1)

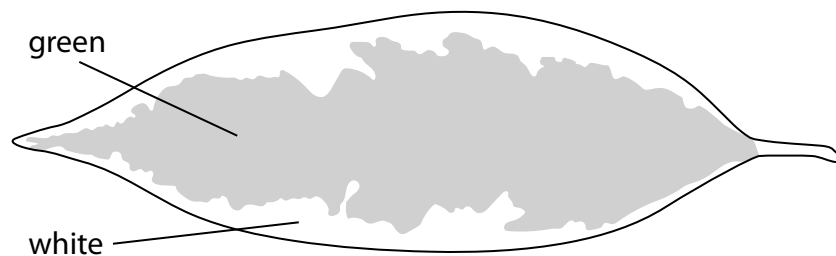
- A carbon dioxide concentration
- B light intensity
- C oxygen concentration
- D temperature

(ii) Which combination of factors is most likely to limit the rate of photosynthesis in the early morning? (1)

- A carbon dioxide concentration and soil pH
- B temperature and light intensity
- C water content of soil and soil pH
- D water content of soil and light intensity

(b) A student carries out an experiment to investigate the need for chlorophyll in photosynthesis.

He uses a variegated leaf as shown.



The green part of the leaf has cells that contain chlorophyll. The white part of the leaf has cells that do not contain chlorophyll.

(i) Describe the procedure used to test this leaf for starch.

(4)

.....

.....

.....

.....

.....

.....

.....

.....

.....

.....

.....

(ii) Draw a labelled diagram of the leaf to show its appearance after the student has completed the test for starch.

(2)

DO NOT WRITE IN THIS AREA

DO NOT WRITE IN THIS AREA

DO NOT WRITE IN THIS AREA

(c) Suggest a method the student could use to measure the area of the green part of the leaf.

(2)

.....

.....

.....

.....

.....

.....

.....

(Total for Question 10 = 10 marks)

DO NOT WRITE IN THIS AREA

DO NOT WRITE IN THIS AREA


DO NOT WRITE IN THIS AREA

- 11 The data in the table shows how the mean maximum lung volume changes with age for males and females.

Age / years	Mean maximum lung volume / dm ³	
	males	females
7	2.10	2.05
16	4.50	3.70
25	5.20	3.80
50	4.80	3.40
70	3.90	2.80

- (a) (i) Plot a bar graph to show this data.

(5)



DO NOT WRITE IN THIS AREA

DO NOT WRITE IN THIS AREA

DO NOT WRITE IN THIS AREA

(ii) Calculate the increase in mean maximum lung volume for males between the ages of 7 and 25.

(1)

increase = dm³

(iii) Explain why the mean maximum lung volume for males and females is similar at age 7 but is different at age 25.

(3)

.....
.....
.....
.....
.....

(b) The data shows the mean maximum lung volume at each age.

(i) Which of the following would improve the reliability of these mean values?

(1)

- A using a larger range of ages
- B measuring more people at each age
- C measuring lung volume in cm³
- D measuring lung volumes in other mammals

(ii) Variation in maximum lung volume exists between males at each age.

Suggest **two** factors that could cause this variation.

(2)

1
2

(Total for Question 11 = 12 marks)

DO NOT WRITE IN THIS AREA

DO NOT WRITE IN THIS AREA

DO NOT WRITE IN THIS AREA

12 Selective breeding has been used by farmers to improve the quality of their animals.

(a) (i) Describe how selective breeding could be used to improve the volume of milk produced by cows.

(3)

.....

.....

.....

.....

.....

.....

.....

.....

.....

.....

(ii) In recent years farmers have used artificial insemination to fertilise their cows.
In this technique many samples of semen are collected from one bull.
These samples can be used to fertilise cows.

Suggest the advantages of using artificial insemination in selective breeding.

(3)

.....

.....

.....

.....

.....

.....

.....

.....

.....

.....

DO NOT WRITE IN THIS AREA

DO NOT WRITE IN THIS AREA

DO NOT WRITE IN THIS AREA

DO NOT WRITE IN THIS AREA

DO NOT WRITE IN THIS AREA

DO NOT WRITE IN THIS AREA

BLANK PAGE