

Please check the examination details below before entering your candidate information

Candidate surname					Other names				
Centre Number					Candidate Number				
Pearson Edexcel International GCSE (9–1)									
Thursday 16 May 2019									
Morning (Time: 2 hours)					Paper Reference 4CH1/1CR 4SD0/1CR				
Chemistry Unit: 4CH1 Science (Double Award) 4SD0 Paper: 1CR									
You must have: Calculator, ruler								Total Marks	

Instructions

- Use **black** ink or ball-point pen.
- **Fill in the boxes** at the top of this page with your name, centre number and candidate number.
- Answer **all** questions.
- Answer the questions in the spaces provided
– *there may be more space than you need.*
- Show all the steps in any calculations and state the units.
- Some questions must be answered with a cross in a box ☒. If you change your mind about an answer, put a line through the box ☒ and then mark your new answer with a cross ☒.

Information

- The total mark for this paper is 110.
- The marks for **each** question are shown in brackets
– *use this as a guide as to how much time to spend on each question.*

Advice

- Read each question carefully before you start to answer it.
- Write your answers neatly and in good English.
- Try to answer every question.
- Check your answers if you have time at the end.

Turn over ►

P60252A

©2019 Pearson Education Ltd.

1/1/1/1/1/1/1/1/1/1/




Pearson

The Periodic Table of the Elements

1	2	3	4	5	6	7	0										
7 Li lithium 3	9 Be beryllium 4	11 Na sodium 11	12 C carbon 6	13 Al aluminium 13	14 N nitrogen 7	15 O oxygen 8	16 F fluorine 9	17 Ne neon 10									
19 K potassium 19	20 Ca calcium 20	23 Sc scandium 21	24 Ti titanium 22	25 V vanadium 23	26 Cr chromium 24	27 Mn manganese 25	28 Fe iron 26	29 Co cobalt 27									
37 Rb rubidium 37	38 Sr strontium 38	39 Y yttrium 39	40 Zr zirconium 40	41 Nb niobium 41	42 Mo molybdenum 42	43 Tc technetium [98]	44 Ru ruthenium 44	45 Rh rhodium 45									
55 Cs caesium 55	56 Ba barium 56	57 La* lanthanum 57	72 Hf hafnium 72	73 Ta tantalum 73	74 W tungsten 74	75 Re rhenium 75	76 Os osmium 76	77 Ir iridium 77									
87 Fr francium 87	88 Ra radium 88	89 Ac* actinium 89	104 Rf rutherfordium 104	105 Db dubnium 105	106 Sg seaborgium 106	107 Bh bohrium 107	108 Hs hassium 108	109 Mt meitnerium 109									
133 Cs caesium 55	137 Ba barium 56	139 La* lanthanum 57	178 Hf hafnium 72	181 Ta tantalum 73	184 W tungsten 74	186 Re rhenium 75	190 Os osmium 76	192 Ir iridium 77									
209 Po polonium 84	210 At astatine 85	209 Bi bismuth 83	207 Pb lead 82	204 Tl thallium 81	201 Hg mercury 80	197 Au gold 79	195 Pt platinum 78	106 Pd palladium 46									
128 Te tellurium 52	127 I iodine 53	122 Sb antimony 51	119 Sn tin 50	115 In indium 49	112 Cd cadmium 48	108 Ag silver 47	103 Rh rhodium 45	106 Pd palladium 46									
79 Se selenium 34	80 Br bromine 35	75 As arsenic 33	73 Ge germanium 32	70 Ga gallium 31	65 Zn zinc 30	63.5 Cu copper 29	59 Ni nickel 28	59 Co cobalt 27									
32 S sulfur 16	35.5 Cl chlorine 17	31 P phosphorus 15	28 Si silicon 14	27 Al aluminium 13	25 Mn manganese 25	24 Cr chromium 24	23 V vanadium 23	22 Ti titanium 22									
16 O oxygen 8	19 F fluorine 9	14 N nitrogen 7	12 C carbon 6	11 B boron 5	9 Be beryllium 4	7 Li lithium 3	4 He helium 2	2 He helium 2									
<p style="text-align: center;">Key</p> <table border="1" style="margin-left: auto; margin-right: auto;"> <tr> <td>1</td> <td>H</td> <td>hydrogen</td> <td>1</td> </tr> </table> <table border="1" style="margin-left: auto; margin-right: auto;"> <tr> <td>relative atomic mass</td> <td>atomic symbol</td> <td>name</td> <td>atomic (proton) number</td> </tr> </table>								1	H	hydrogen	1	relative atomic mass	atomic symbol	name	atomic (proton) number	<p style="text-align: center;">Elements with atomic numbers 112-116 have been reported but not fully authenticated</p>	
1	H	hydrogen	1														
relative atomic mass	atomic symbol	name	atomic (proton) number														

* The lanthanoids (atomic numbers 58-71) and the actinoids (atomic numbers 90-103) have been omitted.

The relative atomic masses of copper and chlorine have not been rounded to the nearest whole number.

DO NOT WRITE IN THIS AREA

DO NOT WRITE IN THIS AREA

DO NOT WRITE IN THIS AREA

DO NOT WRITE IN THIS AREA

DO NOT WRITE IN THIS AREA

DO NOT WRITE IN THIS AREA



Answer ALL questions.

1 This question is about the three states of matter, solid, liquid and gas.

(a) Solids, liquids and gases can be changed from one state to another.

The box gives the names of some changes of state.

condensing	evaporation	melting	sublimation
------------	-------------	---------	-------------

Use words from the box to complete the sentences.

Each word may be used once, more than once or not at all.

(i) The change from solid to liquid is called (1)

(ii) The change from liquid to gas is called (1)

(iii) The change from solid to gas is called (1)

(b) Describe the arrangement and the movement of particles in a solid. (3)

.....

.....

.....

.....

.....

.....

.....

(Total for Question 1 = 6 marks)

DO NOT WRITE IN THIS AREA

DO NOT WRITE IN THIS AREA

DO NOT WRITE IN THIS AREA

DO NOT WRITE IN THIS AREA

DO NOT WRITE IN THIS AREA

DO NOT WRITE IN THIS AREA



2 This question is about some elements in Group 1 of the Periodic Table.

(a) The table gives some statements about the reaction of potassium with water.

Place ticks (✓) in three boxes to show which three statements are correct.

(3)

Statement	
potassium reacts more vigorously than sodium when added to water	
potassium sinks to the bottom of the water	
bubbles of oxygen gas are produced	
a lilac flame is seen	
potassium moves around	
a solution of potassium oxide is formed	

(b) After the reaction of potassium with water is complete, a few drops of universal indicator are added to the solution formed. The universal indicator turns purple.

(i) Suggest a value for the pH of the solution.

(1)

(ii) Give the formula of the ion responsible for this pH value.

(1)

(c) Sodium burns in oxygen to produce sodium oxide.

Complete the equation for this reaction.

(1)



(Total for Question 2 = 6 marks)

DO NOT WRITE IN THIS AREA

DO NOT WRITE IN THIS AREA

DO NOT WRITE IN THIS AREA

DO NOT WRITE IN THIS AREA

DO NOT WRITE IN THIS AREA

DO NOT WRITE IN THIS AREA



3 A student uses paper chromatography to investigate the dyes in five different inks, V, W, X, Y and Z.

This is what she uses.

- a beaker
- a piece of chromatography paper with a pencil line drawn near the bottom of the paper
- a solvent
- inks V, W, X, Y and Z

(a) Describe how the student should set up and carry out her experiment.

You may draw a diagram to help with your answer.

(4)

.....

.....

.....

.....

.....

.....

.....

.....

.....

.....

.....



DO NOT WRITE IN THIS AREA

DO NOT WRITE IN THIS AREA

DO NOT WRITE IN THIS AREA

DO NOT WRITE IN THIS AREA

DO NOT WRITE IN THIS AREA

DO NOT WRITE IN THIS AREA

(b) Explain why the line on the paper is drawn in pencil rather than in ink.

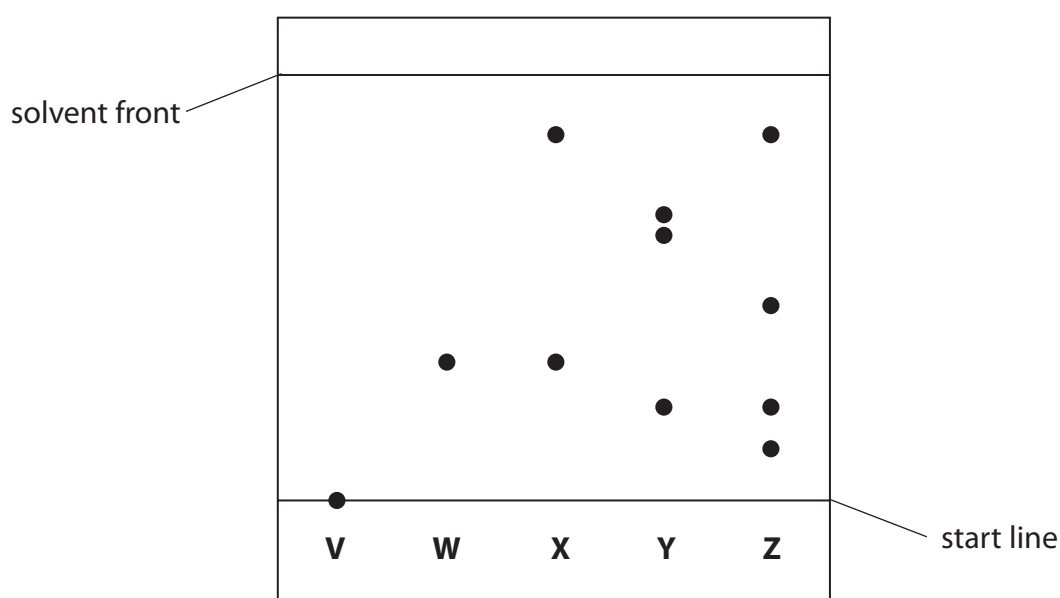
(2)

.....

.....

.....

(c) The chromatogram shows the results for inks V, W, X, Y and Z.



(i) Explain which ink contains a dye that is insoluble in the solvent.

(2)

.....

.....

(ii) Explain which two inks contain the dye that is likely to be the most soluble in the solvent.

(2)

.....

.....

DO NOT WRITE IN THIS AREA

DO NOT WRITE IN THIS AREA

DO NOT WRITE IN THIS AREA

DO NOT WRITE IN THIS AREA

DO NOT WRITE IN THIS AREA

DO NOT WRITE IN THIS AREA



(iii) Explain which two inks may contain only one dye.

(2)

(d) One dye in ink Y moves 4.3 cm when the solvent front moves 6.5 cm.

Calculate the R_f value for this dye.

Give your answer to 2 significant figures.

(3)

R_f value =

(Total for Question 3 = 15 marks)



P 6 0 2 5 2 A 0 7 2 4

4 This question is about hydrocarbons.

(a) State the meaning of the term **hydrocarbon**.

(2)

.....

.....

.....

.....

(b) One homologous series of hydrocarbons is the alkanes.

Pentane (C_5H_{12}) is an alkane.

(i) When pentane burns completely in oxygen, carbon dioxide and water are produced.

Give a chemical equation for this combustion reaction.

(2)

.....

(ii) Incomplete combustion can occur when the oxygen supply is limited.

Give the names of two products of the incomplete combustion of pentane.

(2)

1

2

(iii) One of the products of incomplete combustion is a poisonous gas.

State why this gas is poisonous to humans.

(1)

.....

.....

DO NOT WRITE IN THIS AREA

DO NOT WRITE IN THIS AREA

DO NOT WRITE IN THIS AREA

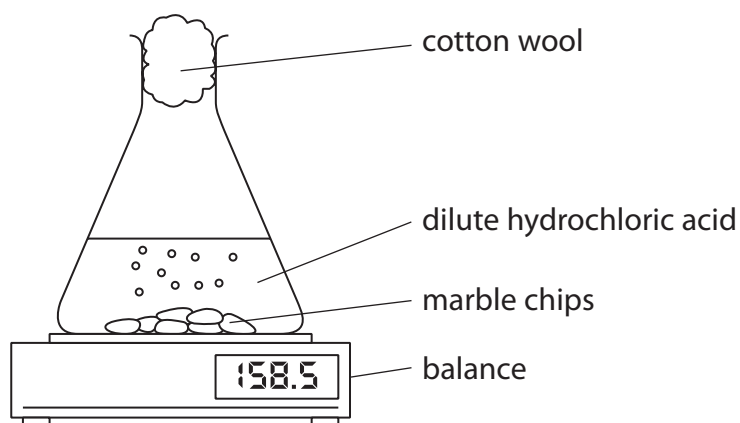
DO NOT WRITE IN THIS AREA

DO NOT WRITE IN THIS AREA

DO NOT WRITE IN THIS AREA



- 5 A student uses this apparatus to investigate the rate of reaction between marble chips and dilute hydrochloric acid.



- (a) During the reaction, the reading on the balance decreases because mass is lost from the flask.

- (i) Explain how using the cotton wool increases the accuracy of this investigation.

(2)

.....

.....

.....

.....

- (ii) Why is mass lost from the flask?

(1)

- A acid particles are moving
- B gas is given off
- C heat energy is produced
- D marble chips are dissolving

DO NOT WRITE IN THIS AREA

DO NOT WRITE IN THIS AREA

DO NOT WRITE IN THIS AREA

DO NOT WRITE IN THIS AREA

DO NOT WRITE IN THIS AREA

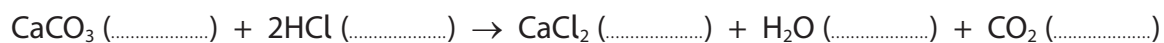
DO NOT WRITE IN THIS AREA



(b) This is the equation for the reaction between marble chips and dilute hydrochloric acid.

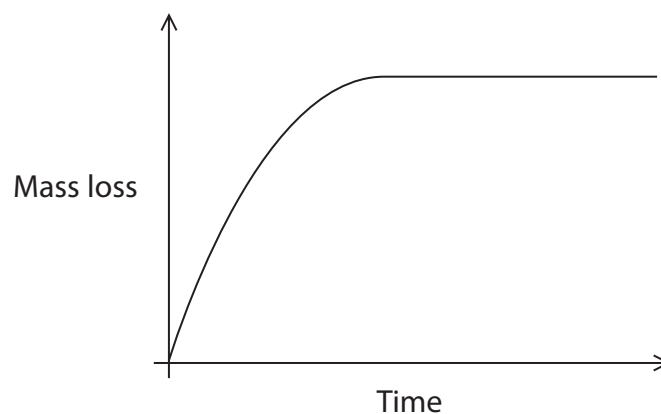
Complete the equation by adding the state symbols.

(2)



(c) The student uses large marble chips in the investigation.

This is a graph of his results.



The student repeats the experiment using the same total mass of smaller marble chips.

On the graph, draw the curve that would be obtained.

[assume the marble chips are in excess]

(2)



(d) The rate of this reaction can be altered by increasing the temperature or by increasing the concentration of the hydrochloric acid.

(i) Explain, using the particle collision theory, how increasing the concentration of the hydrochloric acid would affect the rate of this reaction.

(3)

.....

.....

.....

.....

.....

.....

(ii) Explain, using the particle collision theory, how increasing the temperature would affect the rate of this reaction.

(3)

.....

.....

.....

.....

.....

.....

(Total for Question 5 = 13 marks)

DO NOT WRITE IN THIS AREA

DO NOT WRITE IN THIS AREA

DO NOT WRITE IN THIS AREA

DO NOT WRITE IN THIS AREA

DO NOT WRITE IN THIS AREA

DO NOT WRITE IN THIS AREA



DO NOT WRITE IN THIS AREA

DO NOT WRITE IN THIS AREA

DO NOT WRITE IN THIS AREA

DO NOT WRITE IN THIS AREA

DO NOT WRITE IN THIS AREA

DO NOT WRITE IN THIS AREA

BLANK PAGE



6 Poly(chloroethene) is a polymer.

It is made from its monomer, chloroethene.

(a) Chloroethene has the percentage composition by mass

$$\text{C} = 38.4\% \quad \text{H} = 4.8\% \quad \text{Cl} = 56.8\%$$

Show, by calculation, that the empirical formula of chloroethene is $\text{C}_2\text{H}_3\text{Cl}$

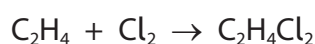
(3)

(b) The molecular formula of chloroethene is also $\text{C}_2\text{H}_3\text{Cl}$

Chloroethene can be prepared by a two-stage process.

In stage 1, ethene reacts with chlorine in the presence of an iron(III) chloride catalyst to form dichloroethane.

The reaction is exothermic.



(i) Give the formula of iron(III) chloride.

(1)

(ii) State the purpose of using a catalyst.

(1)

(iii) State the meaning of the term **exothermic**.

(1)

DO NOT WRITE IN THIS AREA

DO NOT WRITE IN THIS AREA

DO NOT WRITE IN THIS AREA

DO NOT WRITE IN THIS AREA

DO NOT WRITE IN THIS AREA

DO NOT WRITE IN THIS AREA



(iv) What type of reaction occurs in stage 1 between ethene and chlorine?

(1)

- A addition
- B displacement
- C neutralisation
- D substitution

(v) In stage 2, dichloroethane decomposes into chloroethene and hydrogen chloride.

Give a chemical equation for this reaction.

(1)

(c) (i) Draw the displayed formula of

- chloroethene
- the repeat unit of poly(chloroethene)

(3)

chloroethene	repeat unit of poly(chloroethene)

(ii) Draw a dot-and-cross diagram to represent a molecule of chloroethene.

Show only the outer electrons of each atom.

(2)

(Total for Question 6 = 13 marks)



(b) Magnesium nitrate crystals contain water of crystallisation with the formula $\text{Mg}(\text{NO}_3)_2 \cdot 6\text{H}_2\text{O}$

(i) Show by calculation that the relative formula mass of $\text{Mg}(\text{NO}_3)_2 \cdot 6\text{H}_2\text{O}$ is 256.

(1)

(ii) Show that the maximum mass of $\text{Mg}(\text{NO}_3)_2 \cdot 6\text{H}_2\text{O}$ that could be made from 0.050 mol of nitric acid is about 6 g.

(3)

(iii) The actual mass of crystals that the student obtains is 4.8 g.

Calculate the percentage yield of $\text{Mg}(\text{NO}_3)_2 \cdot 6\text{H}_2\text{O}$ in this experiment.

(2)

percentage yield = %

(Total for Question 7 = 14 marks)



P 6 0 2 5 2 A 0 1 7 2 4

8 A student investigates the neutralisation reaction between sodium hydroxide and nitric acid.

This is her method.

- pour 20 cm³ of sodium hydroxide solution into a polystyrene cup
- record the temperature of the sodium hydroxide solution
- add 5 cm³ of dilute nitric acid to the cup
- stir the mixture and record the highest temperature reached
- add further 5 cm³ portions of dilute nitric acid, recording the highest temperature reached each time, until a total of 40 cm³ of acid has been added

(a) (i) Give a word equation for this neutralisation reaction.

(1)

(ii) Explain why a polystyrene cup is used rather than a beaker.

(2)

(iii) Give a safety precaution that the student should take when using sodium hydroxide solution.

(1)

(b) The table shows the student's results.

Total volume of acid in cm³	0	5	10	15	20	25	30	35	40
Temperature of reaction mixture in °C	20.5	22.5	24.4	26.4	28.5	28.3	27.5	26.7	26.0

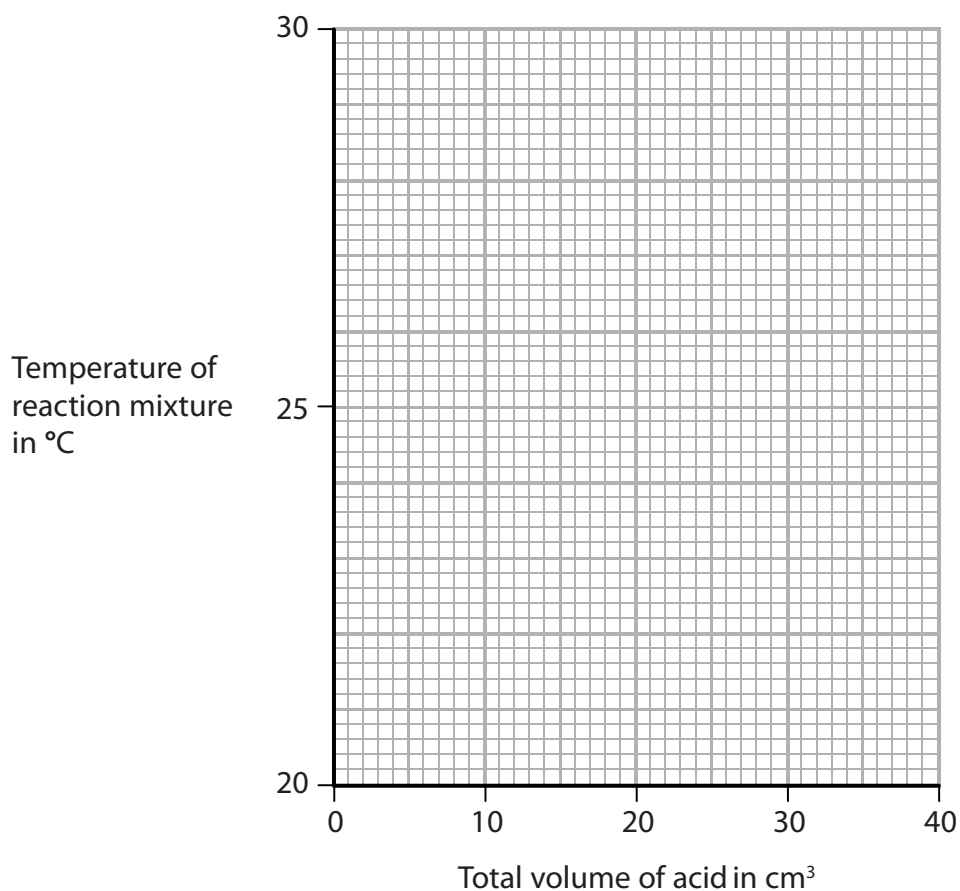


(i) Plot the results on the grid.

Draw a straight line of best fit through the first five points and another straight line of best fit through the last four points.

Make sure that the two lines cross.

(3)



(ii) The point where the lines cross shows

- the volume of acid needed to exactly neutralise the alkali
- the maximum temperature reached

Use your graph to determine these values.

(2)

volume of acid = cm³

maximum temperature = °C

(Total for Question 8 = 9 marks)



- 9 (a) Diamond is a naturally-occurring form of carbon.

It has a giant molecular structure.

Explain, with reference to its structure and bonding, why diamond has a high melting point. (3)

.....

.....

.....

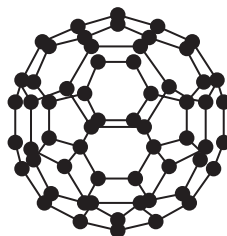
.....

.....

.....

- (b) C₆₀ fullerene is another form of carbon.

The diagram shows a molecule of C₆₀ fullerene.



- (i) Explain why C₆₀ fullerene has a much lower melting point than diamond. (2)

.....

.....

.....

- (ii) C₆₀ fullerene is used by doctors when injecting medicines into their patients.

C₆₀ fullerene allows medicines, which might damage some parts of the body, to reach the part of the body where they are needed.

Suggest why C₆₀ fullerene is suitable for this purpose. (1)

.....

.....

.....

DO NOT WRITE IN THIS AREA

DO NOT WRITE IN THIS AREA

DO NOT WRITE IN THIS AREA

DO NOT WRITE IN THIS AREA


DO NOT WRITE IN THIS AREA

DO NOT WRITE IN THIS AREA



10 A student investigates the reaction between zinc and copper(II) sulfate solution.

The equation for the reaction is



This is his method.

- add exactly 25.0 cm³ of copper(II) sulfate solution to a polystyrene cup
- record the temperature of the solution
- add about 5 g of zinc powder (an excess) and stir the mixture
- record the highest temperature reached

(a) (i) Suggest why it is not important to add an exact mass of zinc powder.

(1)

.....

.....

(ii) State the colour change of the solution.

(2)

from to

(b) The table shows the student's results

volume of copper(II) sulfate solution in cm ³	25.0
initial temperature of copper(II) sulfate solution in °C	19.0
final temperature of solution in °C	31.5

(i) Show that the heat energy change (Q) is about 1300 J.
[for the solution, $c = 4.18 \text{ J/g/}^\circ\text{C}$]

[mass of 1.00 cm³ of solution = 1.00 g]

(3)

DO NOT WRITE IN THIS AREA

DO NOT WRITE IN THIS AREA

DO NOT WRITE IN THIS AREA

DO NOT WRITE IN THIS AREA

DO NOT WRITE IN THIS AREA

DO NOT WRITE IN THIS AREA



- (ii) The mass of anhydrous copper(II) sulfate (CuSO_4) used to make 25.0 cm^3 of solution is 2.00 g .

Calculate the amount, in moles, of CuSO_4 in 2.00 g .

$[M_r \text{ of } \text{CuSO}_4 = 159.5]$

(1)

amount of $\text{CuSO}_4 = \dots\dots\dots \text{ mol}$

- (iii) Calculate the value of the enthalpy change (ΔH), in kilojoules per mole, for the reaction between zinc and copper(II) sulfate.

Include a sign in your answer.

(3)

$\Delta H = \dots\dots\dots \text{ kJ/mol}$

(Total for Question 10 = 10 marks)

TOTAL FOR PAPER = 110 MARKS



DO NOT WRITE IN THIS AREA

DO NOT WRITE IN THIS AREA

DO NOT WRITE IN THIS AREA

BLANK PAGE

