

Please check the examination details below before entering your candidate information

Candidate surname					Other names				
Centre Number					Candidate Number				
Pearson Edexcel International GCSE (9–1)					<input type="text"/> <input type="text"/> <input type="text"/> <input type="text"/> <input type="text"/> <input type="text"/> <input type="text"/> <input type="text"/> <input type="text"/> <input type="text"/>				
Wednesday 12 June 2019									
Morning (Time: 1 hour 15 minutes)					Paper Reference 4CH1/2C				
Chemistry Unit: 4CH1 Paper 2C									
You must have: Calculator, ruler								Total Marks	

Instructions

- Use **black** ink or ball-point pen.
- **Fill in the boxes** at the top of this page with your name, centre number and candidate number.
- Answer **all** questions.
- Answer the questions in the spaces provided
– *there may be more space than you need.*
- Some questions must be answered with a cross in a box ☒. If you change your mind about an answer, put a line through the box ☒ and then mark your new answer with a cross ☒.

Information

- The total mark for this paper is 70.
- The marks for **each** question are shown in brackets
– *use this as a guide as to how much time to spend on each question.*

Advice

- Read each question carefully before you start to answer it.
- Try to answer every question.
- Check your answers if you have time at the end.

Turn over ►

P58563A

©2019 Pearson Education Ltd.

1/1/1/1/




Pearson

The Periodic Table of the Elements

	1	2	3	4	5	6	7	0											
	7 Li lithium 3	9 Be beryllium 4	11 Na sodium 11	12 Mg magnesium 12	13 Al aluminium 13	14 Si silicon 14	15 P phosphorus 15	16 S sulfur 16	17 Cl chlorine 17	18 Ar argon 18									
	19 K potassium 19	20 Ca calcium 20	21 Sc scandium 21	22 Ti titanium 22	23 V vanadium 23	24 Cr chromium 24	25 Mn manganese 25	26 Fe iron 26	27 Co cobalt 27	28 Ni nickel 28	29 Cu copper 29	30 Zn zinc 30	31 Ga gallium 31	32 Ge germanium 32	33 As arsenic 33	34 Se selenium 34	35 Br bromine 35	36 Kr krypton 36	
	37 Rb rubidium 37	38 Sr strontium 38	39 Y yttrium 39	40 Zr zirconium 40	41 Nb niobium 41	42 Mo molybdenum 42	43 Tc technetium [98]	44 Ru ruthenium 44	45 Rh rhodium 45	46 Pd palladium 46	47 Ag silver 47	48 Cd cadmium 48	49 In indium 49	50 Sn tin 50	51 Sb antimony 51	52 Te tellurium 52	53 I iodine 53	54 Xe xenon 54	
	55 Cs caesium 55	56 Ba barium 56	57 La* lanthanum 57	72 Hf hafnium 72	73 Ta tantalum 73	74 W tungsten 74	75 Re rhenium 75	76 Os osmium 76	77 Ir iridium 77	78 Pt platinum 78	79 Au gold 79	80 Hg mercury 80	81 Tl thallium 81	82 Pb lead 82	83 Bi bismuth 83	84 Po polonium [209]	85 At astatine [210]	86 Rn radon [222]	
	[223] Fr francium 87	[226] Ra radium 88	[227] Ac* actinium 89	[261] Rf rutherfordium 104	[262] Db dubnium 105	[266] Sg seaborgium 106	[264] Bh bohrium 107	[277] Hs hassium 108	[268] Mt meitnerium 109	[271] Ds darmstadtium 110	[272] Rg roentgenium 111	Elements with atomic numbers 112-116 have been reported but not fully authenticated							

1 H hydrogen 1

relative atomic mass atomic symbol atomic (proton) number
--

* The lanthanoids (atomic numbers 58-71) and the actinoids (atomic numbers 90-103) have been omitted.

The relative atomic masses of copper and chlorine have not been rounded to the nearest whole number.

DO NOT WRITE IN THIS AREA

DO NOT WRITE IN THIS AREA

DO NOT WRITE IN THIS AREA

DO NOT WRITE IN THIS AREA

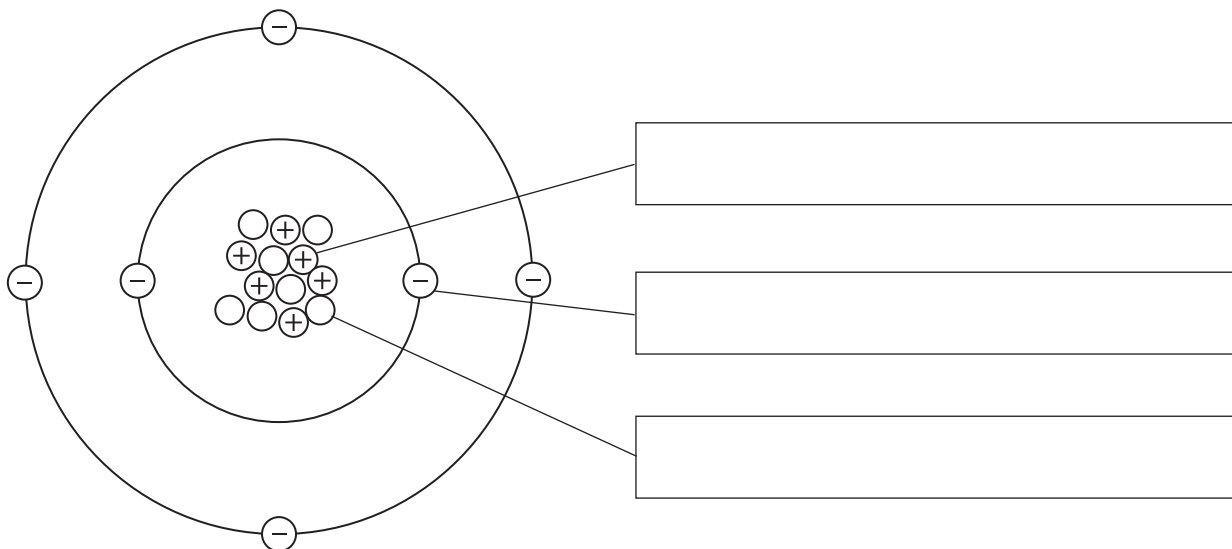
DO NOT WRITE IN THIS AREA

DO NOT WRITE IN THIS AREA



Answer ALL questions. Write your answers in the spaces provided.

1 The diagram shows the particles in an atom of an element.



(a) The box gives the names of some particles.

electron ion molecule neutron proton

Use words from the box to label the diagram.

(3)

(b) Give the mass number of this atom.

(1)

(c) Complete the sentence about isotopes.

(2)

Isotopes are atoms that have the same number of

but have a different number of

(Total for Question 1 = 6 marks)



DO NOT WRITE IN THIS AREA

DO NOT WRITE IN THIS AREA

DO NOT WRITE IN THIS AREA

DO NOT WRITE IN THIS AREA

DO NOT WRITE IN THIS AREA

DO NOT WRITE IN THIS AREA

2 The table gives some information about the halogens, chlorine, bromine and iodine.

Halogen	Physical state at room temperature	Colour
chlorine	gas	pale green
bromine		red-brown
iodine	solid	

(a) Complete the table.

(2)

(b) Chlorine has two isotopes of mass numbers 35 and 37

The relative percentage of each isotope in a sample of chlorine is

chlorine-35 77.78% chlorine-37 22.22%

Calculate the relative atomic mass of this sample of chlorine.

Give your answer to one decimal place.

(3)

relative atomic mass =

(c) A student is given an aqueous solution of chlorine and an aqueous solution of potassium bromide.

Explain how he can use these two solutions to compare the reactivity of chlorine with the reactivity of bromine.

(4)

.....

.....

.....

.....

.....

.....

.....

.....

.....

.....

(Total for Question 2 = 9 marks)



DO NOT WRITE IN THIS AREA

DO NOT WRITE IN THIS AREA

DO NOT WRITE IN THIS AREA

DO NOT WRITE IN THIS AREA

DO NOT WRITE IN THIS AREA

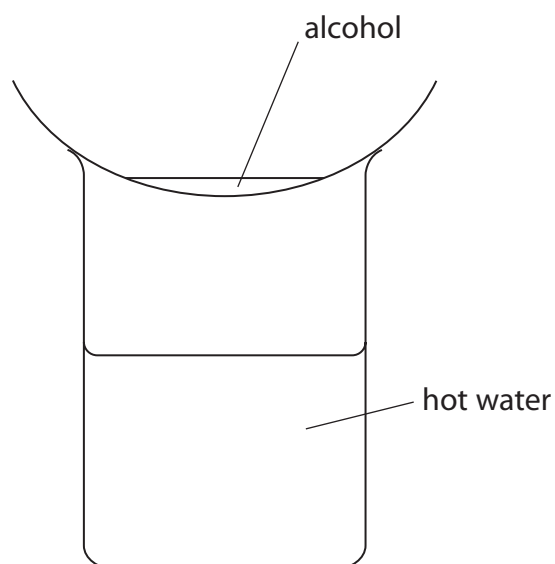
DO NOT WRITE IN THIS AREA

BLANK PAGE



- 3 Methanol, ethanol, propanol and butanol are alcohols. They are all liquids that evaporate easily when warmed.

A student uses this apparatus to compare the time taken for the four liquids to evaporate.



She uses this method.

- pour some methanol into an evaporating basin
- place the evaporating basin on top of a beaker containing hot water
- measure the time taken for the methanol to evaporate completely
- repeat the experiment with each of the other alcohols, using the same apparatus

- (a) State two variables the student should control to make sure her results are valid.

(2)

1

2

.....

- (b) State why it is not safe to heat the evaporating basin directly with a Bunsen flame.

(1)

.....

.....

DO NOT WRITE IN THIS AREA

DO NOT WRITE IN THIS AREA

DO NOT WRITE IN THIS AREA

DO NOT WRITE IN THIS AREA

DO NOT WRITE IN THIS AREA

DO NOT WRITE IN THIS AREA



(c) The table shows the results of experiments done by four students, A, B, C and D.

Alcohol	Formula of alcohol	Time taken for liquid to evaporate in s				
		Student A	Student B	Student C	Student D	Mean time in s
methanol	CH ₃ OH	20	24	22	26	23
ethanol	C ₂ H ₅ OH	32	34	35	30	33
propanol	C ₃ H ₇ OH	45	47	50	48	48
butanol	C ₄ H ₉ OH	64	63	90	60	

(i) Calculate the mean (average) time for butanol to evaporate.

(2)

mean time = s

(ii) Explain how the results show which alcohol evaporates most easily.

(2)

.....

.....

.....

.....

(iii) State the relationship between the number of carbon atoms in the molecule and how easily the alcohol evaporates.

(2)

.....

.....

.....

.....

(Total for Question 3 = 9 marks)



4 This question is about metals.

(a) Which statement describes metallic bonding?

(1)

- A electrostatic attraction between oppositely charged ions
- B electrostatic attraction between the nuclei of two atoms and a pair of electrons shared between them
- C electrostatic attraction between positively charged particles and delocalised electrons
- D electrostatic attraction between atoms

(b) Aluminium is malleable and can be easily shaped to make saucepans used for cooking food.

State two other properties of aluminium that make it suitable for saucepans used for cooking food.

(2)

1

2

DO NOT WRITE IN THIS AREA

DO NOT WRITE IN THIS AREA

DO NOT WRITE IN THIS AREA

DO NOT WRITE IN THIS AREA

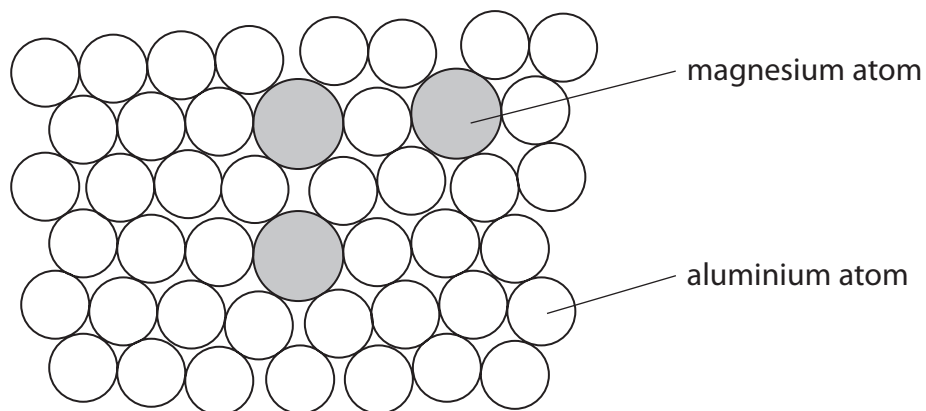
DO NOT WRITE IN THIS AREA

DO NOT WRITE IN THIS AREA



(c) Magnalium is an alloy of aluminium and magnesium.

The diagram shows how the atoms are arranged in this alloy.



(i) State what is meant by the term **alloy**.

(1)

.....

.....

(ii) Explain why magnalium is harder than aluminium.

(3)

.....

.....

.....

.....

.....

.....

(Total for Question 4 = 7 marks)

DO NOT WRITE IN THIS AREA

DO NOT WRITE IN THIS AREA

DO NOT WRITE IN THIS AREA

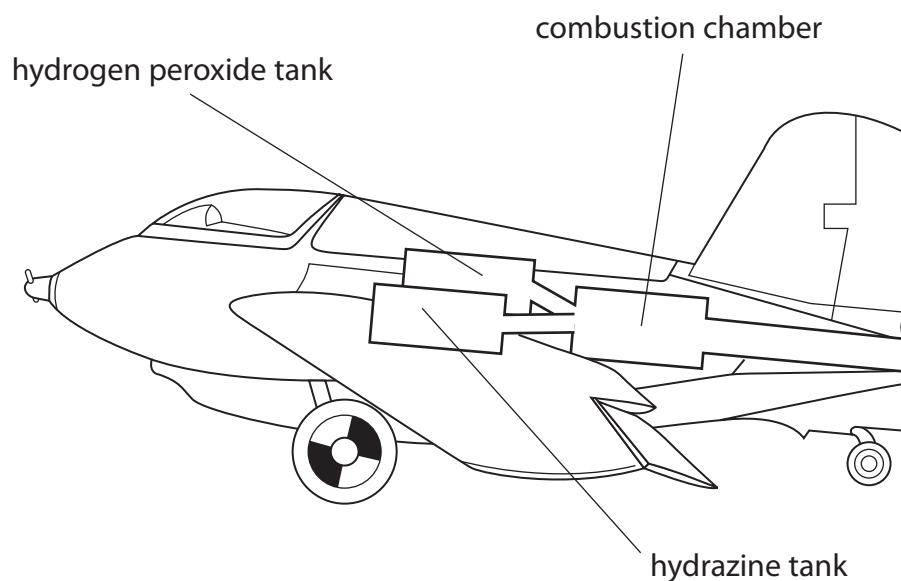
DO NOT WRITE IN THIS AREA

DO NOT WRITE IN THIS AREA

DO NOT WRITE IN THIS AREA



5 During the Second World War, engineers developed a rocket-powered aircraft.




The aircraft carried these two liquids

- hydrazine, N_2H_4
- hydrogen peroxide, H_2O_2

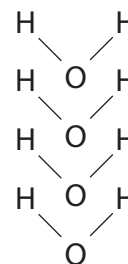
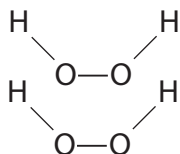
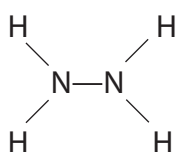
When these two liquids mix in the combustion chamber, they evaporate and then react rapidly to form nitrogen gas, N_2 , and steam, H_2O

The reaction is exothermic.

The equation for the reaction is



The displayed formulae for the reactants and products are



- (a) The tables give the bond energies for the bonds broken in the reactants and the bonds made in the products.

Bonds broken		Bonds made	
bond	bond energy in kJ/mol	bond	bond energy in kJ/mol
N—N	159	N≡N	945
N—H	391	O—H	463
O—O	143		
O—H	463		

- (i) Use the data in the tables to calculate the total amount of energy required to break all of the bonds in the reactants.

(1)

energy required = kJ

- (ii) Use the data in the tables to calculate the total amount of energy released when all of the bonds in the products are made.

(1)

energy released = kJ

- (iii) Calculate the enthalpy change, ΔH , in kJ/mol, for the reaction. Include a sign in your answer.

(3)

 $\Delta H = \dots\dots\dots$ kJ/mol

(b) Explain, in terms of bonds broken and bonds made, why this reaction is exothermic.

(2)

.....

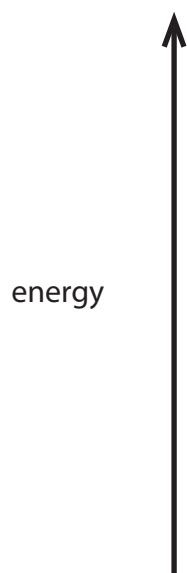
.....

.....

.....

(c) Draw an energy level diagram for the reaction between N_2H_4 and H_2O_2

(3)



(Total for Question 5 = 10 marks)

DO NOT WRITE IN THIS AREA

DO NOT WRITE IN THIS AREA

DO NOT WRITE IN THIS AREA

DO NOT WRITE IN THIS AREA

DO NOT WRITE IN THIS AREA

DO NOT WRITE IN THIS AREA



DO NOT WRITE IN THIS AREA

DO NOT WRITE IN THIS AREA

DO NOT WRITE IN THIS AREA

DO NOT WRITE IN THIS AREA

DO NOT WRITE IN THIS AREA

DO NOT WRITE IN THIS AREA

BLANK PAGE



6 Some cars in Brazil use ethanol, C_2H_5OH , as a fuel instead of petrol.

The ethanol is made by the fermentation of glucose which is obtained from sugar cane.

The sugar is extracted from the sugar cane and then dissolved in water to make a sugar solution.

(a) (i) Name the substance that is added to the sugar solution that causes glucose to ferment. (1)

(ii) Which temperature is the most suitable for fermentation? (1)

A $0^\circ C$

B $10^\circ C$

C $30^\circ C$

D $80^\circ C$

(iii) Explain why fermentation is done in the absence of air. (2)

(b) (i) State what is meant by the term **fuel**. (1)

(ii) Write a chemical equation for the complete combustion of ethanol in air. (2)

DO NOT WRITE IN THIS AREA

DO NOT WRITE IN THIS AREA

DO NOT WRITE IN THIS AREA

DO NOT WRITE IN THIS AREA

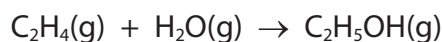
DO NOT WRITE IN THIS AREA

DO NOT WRITE IN THIS AREA



(c) Ethanol is also manufactured by reacting steam with ethene, C_2H_4

The equation for this reaction is



State the conditions of temperature and pressure used in this process.

(2)

temperature

pressure

(d) When ethanol is heated with acidified potassium dichromate(VI), it is oxidised to ethanoic acid.

(i) State the colour change that occurs in the potassium dichromate(VI) during this reaction.

(1)

from to


(ii) The structural formula of ethanoic acid is CH_3COOH

Draw the displayed formula of ethanoic acid.

(2)

(iii) Complete the equation for the reaction of ethanoic acid with sodium.

(2)



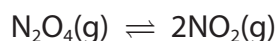
(Total for Question 6 = 14 marks)



7 Dinitrogen tetraoxide, N_2O_4 , is a colourless gas.

Nitrogen dioxide, NO_2 , is a brown gas.

The two gases can exist together in dynamic equilibrium according to the equation



(a) Explain what is meant by the term **dynamic equilibrium**.

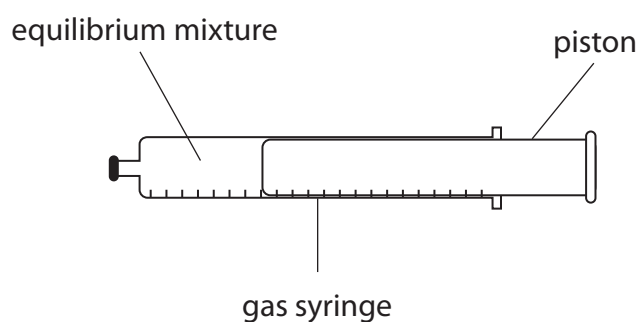
(2)

.....

.....

.....

(b) Some N_2O_4 and some NO_2 are put into a sealed gas syringe and allowed to form an equilibrium mixture.



This equilibrium mixture is brown.

(i) The pressure of the gas in the syringe is increased by pushing in the piston. The mixture is then allowed to reach a new equilibrium at the same temperature as before.

Explain why the new equilibrium mixture contains less NO_2 than the original equilibrium mixture.

(2)

.....

.....

.....

.....

.....



- (ii) A student suggests that the new equilibrium mixture would be lighter in colour than the original equilibrium mixture, as there is now less NO_2 present.

Suggest why the new equilibrium mixture is actually darker than the original.

(1)

- (c) Carbon monoxide, CO , and oxides of nitrogen are produced in a car engine when petrol is burned.

These oxides can be partly removed by using a catalytic converter fitted to the car's exhaust system.

- (i) State how oxides of nitrogen are produced in the car engine.

(1)

- (ii) Give a disadvantage of allowing oxides of nitrogen to escape into the atmosphere.

(1)

- (iii) Write a chemical equation for the reaction between nitrogen monoxide, NO , and carbon monoxide to form carbon dioxide and nitrogen.

(1)

(Total for Question 7 = 8 marks)



- 8 The concentration of NaClO(aq) in a solution of bleach is found by reacting it with hydrochloric acid.

The equation for the reaction is



An excess of dilute hydrochloric acid is added to 4.00 cm^3 of bleach solution.

60.0 cm^3 of chlorine gas is produced.

- (a) Explain a safety precaution that should be taken when doing this experiment.

(2)

.....

.....

.....

- (b) (i) Calculate the amount, in moles, of chlorine gas produced.
Assume one mole of chlorine gas occupies $24\,000 \text{ cm}^3$.

(2)

amount of chlorine = mol

- (ii) Determine the amount, in moles, of NaClO in 4.00 cm^3 of bleach.

(1)

amount of NaClO = mol

- (iii) Calculate the concentration, in mol/dm^3 , of the bleach solution.

(2)

concentration = mol/dm^3

(Total for Question 8 = 7 marks)

TOTAL FOR PAPER = 70 MARKS

DO NOT WRITE IN THIS AREA

DO NOT WRITE IN THIS AREA

DO NOT WRITE IN THIS AREA

DO NOT WRITE IN THIS AREA

DO NOT WRITE IN THIS AREA

DO NOT WRITE IN THIS AREA



DO NOT WRITE IN THIS AREA

DO NOT WRITE IN THIS AREA

DO NOT WRITE IN THIS AREA

DO NOT WRITE IN THIS AREA

DO NOT WRITE IN THIS AREA

DO NOT WRITE IN THIS AREA

BLANK PAGE



P 5 8 5 6 3 A 0 1 9 2 0

DO NOT WRITE IN THIS AREA

DO NOT WRITE IN THIS AREA

DO NOT WRITE IN THIS AREA

BLANK PAGE

