

Write your name here

Surname

Other names

Pearson Edexcel Certificate

Centre Number

Candidate Number

**Pearson Edexcel
International GCSE**

--	--	--	--	--

--	--	--	--

Chemistry

Unit: KCH0/4CH0

Paper: 2C

Tuesday 10 June 2014 – Afternoon

Time: 1 hour

Paper Reference

**KCH0/2C
4CH0/2C**

You must have:

Calculator

Total Marks

Instructions

- Use **black** ink or ball-point pen.
- **Fill in the boxes** at the top of this page with your name, centre number and candidate number.
- Answer **all** questions.
- Answer the questions in the spaces provided – *there may be more space than you need.*
- Show all the steps in any calculations and state the units.
- Some questions must be answered with a cross in a box ☒. If you change your mind about an answer, put a line through the box ☒ and then mark your new answer with a cross ☒.

Information

- The total mark for this paper is 60.
- The marks for **each** question are shown in brackets – *use this as a guide as to how much time to spend on each question.*

Advice

- Read each question carefully before you start to answer it.
- Keep an eye on the time.
- Write your answers neatly and in good English.
- Try to answer every question.
- Check your answers if you have time at the end.

Turn over ►

P42866A

©2014 Pearson Education Ltd.

1/1/1



PEARSON

THE PERIODIC TABLE

0

7

6

5

4

3

2

1

Group

Group

2

1

Period

1

2

3

4

5

6

Period

1

2

3

4

5

6

7

Group

1

2

3

4

5

6

7

8

9

10

11

12

13

14

15

16

17

18

19

20

21

22

23

24

25

26

27

28

29

30

31

32

33

34

35

36

37

38

39

40

41

42

43

44

45

46

47

48

49

50

51

52

53

54

55

56

57

58

59

60

61

62

63

64

65

66

67

68

69

70

71

72

73

74

75

76

77

78

79

80

81

82

83

84

85

86

87

88

89

90

91

92

93

94

95

96

97

98

99

100

101

102

103

104

105

106

107

108

109

110

111

112

113

114

115

116

117

118

119

120

121

122

123

124

125

126

127

128

129

130

131

132

133

134

135

136

137

138

139

140

141

142

143

144

145

146

147

148

149

150

151

152

153

154

155

156

157

158

159

160

161

162

163

164

165

166

167

168

169

170

171

172

173

174

175

176

177

178

179

180

181

182

183

184

185

186

187

188

189

190

191

192

193

194

195

196

197

198

199

200

201

202

203

204

205

206

207

208

209

210

211

212

213

214

215

216

217

218

219

220

221

222

223

224

225

226

227

228

229

230

231

232

233

234

235

236

237

238

239

240

241

242

243

244

245

246

247

248

249

250

251

252

253

254

255

256

257

258

259

260

261

262

263

264

265

266

267

268

269

270

271

272

273

274

275

276

277

278

279

280

281

282

283

284

285

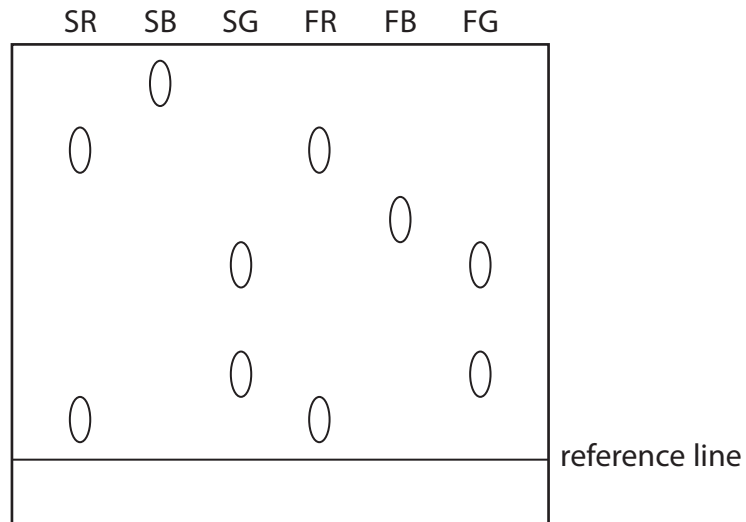
BLANK PAGE



Answer ALL questions.

1 A student investigates some food colourings, each of which is made up of one or more dyes. She produces a chromatogram using the safe colourings red (SR), blue (SB) and green (SG) and food colourings red (FR), blue (FB) and green (FG).

The diagram shows her chromatogram.



(a) How many dyes are there in SR?

(1)

- A** 1 **B** 2 **C** 3 **D** 4

(b) Complete the table by placing ticks (✓) next to the two food colourings that are definitely safe to use.

Explain your answer.

(2)

Food colouring	Safe to use?
FR	
FB	
FG	

explanation

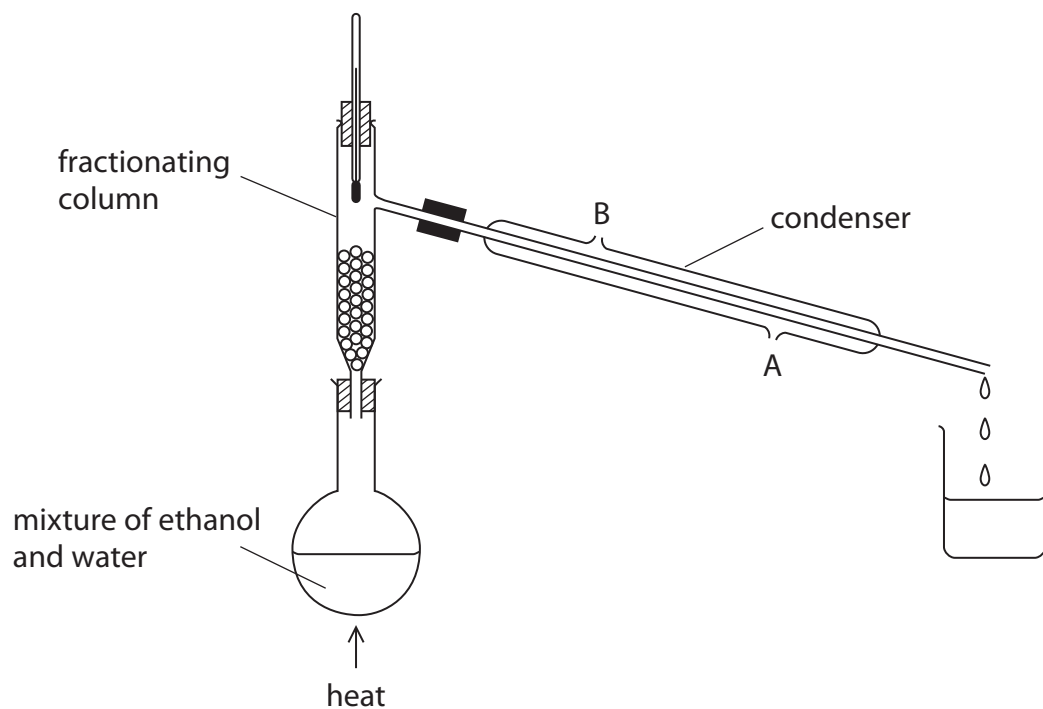
.....

.....

(Total for Question 1 = 3 marks)



- 2 This apparatus is used to separate a mixture of ethanol (boiling point $78\text{ }^{\circ}\text{C}$) and water (boiling point $100\text{ }^{\circ}\text{C}$).



- (a) What is the name of this method of separation?

(1)

- (b) Why can ethanol and water be separated by this method?

(1)

- (c) Suggest why water should enter the condenser at A rather than B.

(1)

- (d) Explain why the first liquid to be collected in the beaker is mostly ethanol.

(1)

(Total for Question 2 = 4 marks)



3 The diagram shows a section of the Periodic Table and the symbols for the first 20 elements.

		H														He	
Li	Be									B	C	N	O	F	Ne		
Na	Mg									Al	Si	P	S	Cl	Ar		
K	Ca																

(a) (i) What name is given to a horizontal row of elements such as Na to Ar? (1)

.....

(ii) Name two metals in the row Na to Ar. (1)

..... and

(iii) Which is the least reactive element in the row Na to Ar?
Explain your answer. (2)

least reactive element.....

explanation.....

.....

.....

(b) State, in terms of electronic configurations, why the elements in the column Li to K have similar chemical properties. (1)

.....

.....

(c) (i) Which element has atomic number 6? (1)

.....

(ii) Which element has atoms with an electronic configuration of 2.8.6? (1)

.....



(d) An atom has atomic number 8 and mass number 18.

How many protons, neutrons and electrons does this atom contain?

(2)

protons.....

neutrons.....

electrons.....

(Total for Question 3 = 9 marks)



BLANK PAGE



4 A student investigates the rate of reaction between sodium thiosulfate and hydrochloric acid at 25 °C.

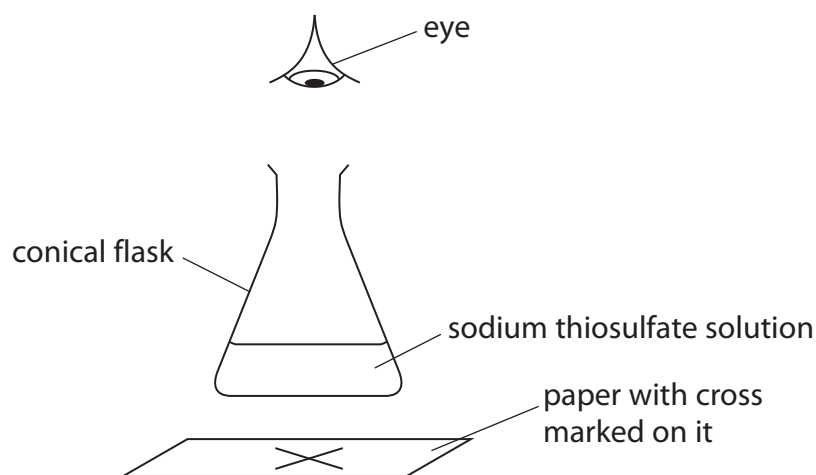
The equation for the reaction is



She uses this method.

- pour 50 cm³ of sodium thiosulfate solution into a conical flask
- place the conical flask on top of a sheet of paper with a cross drawn on it
- add 10 cm³ of hydrochloric acid and start the timer
- stop the timer when the cross can no longer be seen and record the time taken

The student repeats the experiment five times with different volumes of sodium thiosulfate solution. She adds water as necessary to keep the total volume of reaction mixture constant.



(a) Why can the student no longer see the cross at the end of each experiment?

(1)

(b) The student keeps the total volume of the reaction mixture constant in each experiment.

Explain how this makes each experiment a fair test.

(1)



(c) The table shows the student's results.

Experiment	Volume of $\text{Na}_2\text{S}_2\text{O}_3$ solution in cm^3	Volume of water in cm^3	Time in seconds
1	50	0	45
2	40	10	60
3	30	20	80
4	20	30	130
5	15	35	180
6	10	40	255

Why is it important for the student to add the water before the acid in experiments 2 to 6?

(1)

.....

.....

.....

(d) Sulfur dioxide gas is given off in the reaction.

Suggest a safety precaution that the student should take when doing this experiment.

Explain your answer.

(2)

precaution.....

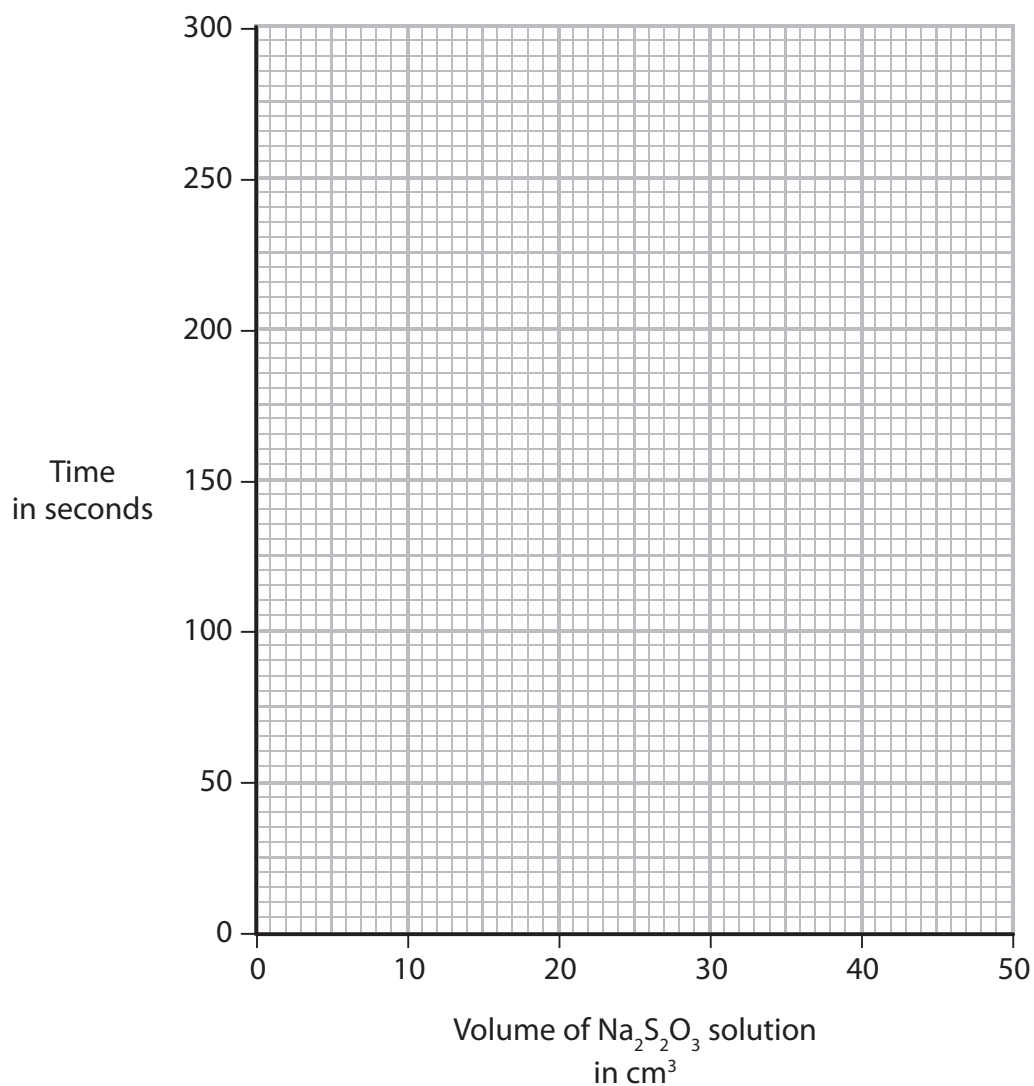
explanation.....

.....



(e) (i) Plot the student's results on the grid and draw a curve of best fit.

(3)



(ii) On the grid, sketch the curve that you would expect if the investigation were repeated at 40°C .

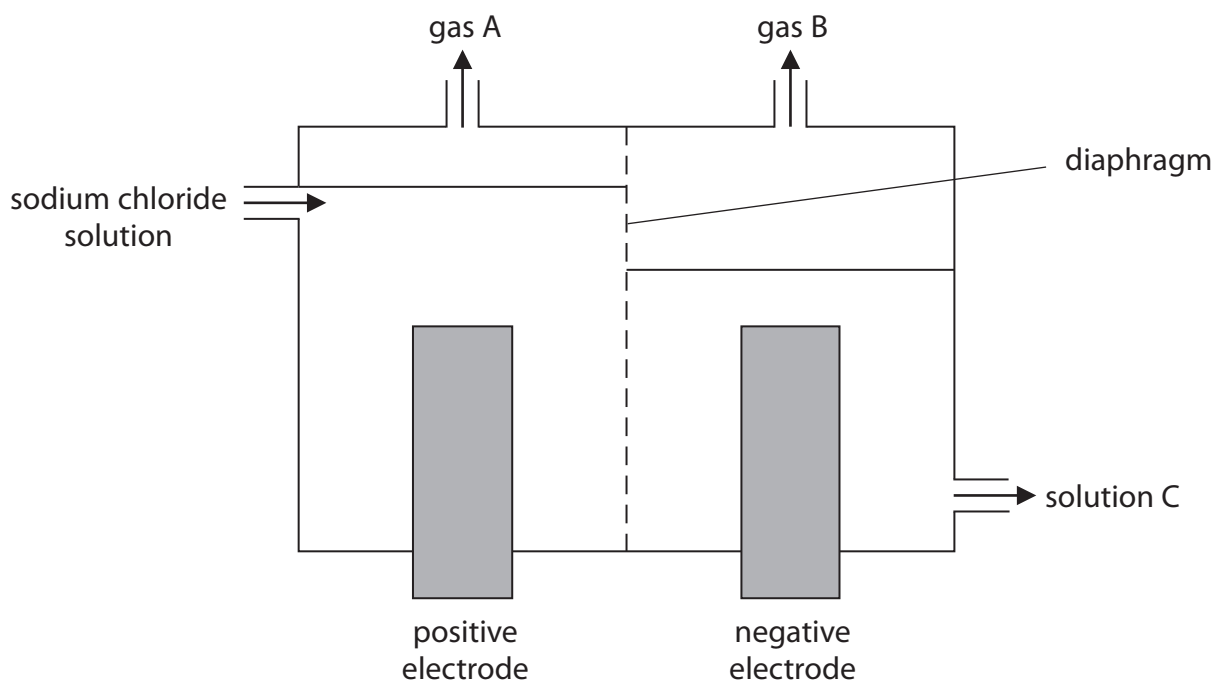
Assume all other factors remain constant.

(2)

(Total for Question 4 = 10 marks)



- 5 The diagram shows the diaphragm cell used in the electrolysis of concentrated sodium chloride solution, NaCl(aq).



- (a) Explain what is meant by the term **electrolysis**.

(2)

.....

.....

.....

.....

- (b) Identify gas A, gas B and solution C.

(3)

gas A.....

gas B.....

solution C.....

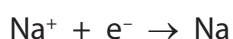


(c) Sodium is manufactured by the electrolysis of molten sodium chloride, NaCl(l).

Sodium is produced at the negative electrode and chlorine is produced at the positive electrode.

(i) Why does the sodium chloride have to be molten before it will conduct electricity?
(1)

(ii) The ionic half-equation for the formation of sodium is



Write the ionic half-equation for the formation of chlorine from chloride ions.
(2)

(Total for Question 5 = 8 marks)



6 Solid X contains two cations (positive ions) and one anion (negative ion).

One of the cations is Fe^{3+}

(a) The table describes the tests carried out on an aqueous solution of X and some of the observations made.

Complete the table by giving the missing observation.

(1)

Test	Observation
add sodium hydroxide solution
then heat the mixture and test the gas given off with damp red litmus paper	litmus paper turns blue
add dilute hydrochloric acid, then add a few drops of barium chloride solution	white precipitate forms

(b) (i) Which cation, other than Fe^{3+} , is present in X?

Explain your answer.

(2)

cation.....

explanation.....

.....

(ii) Identify the anion present in X.

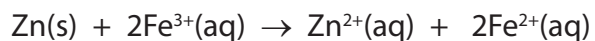
(1)

.....



(c) When zinc is added to a solution containing Fe³⁺ ions, a reaction occurs.

The ionic equation for this reaction is



Identify the reducing agent in this reaction and explain your choice.

(2)

reducing agent.....

explanation.....

.....

.....

(Total for Question 6 = 6 marks)



7 (a) The first two members of the homologous series of alcohols are methanol and ethanol.

(i) Give two characteristics of the compounds in a homologous series.

(2)

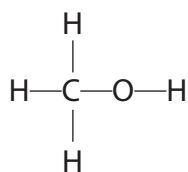
1.....

.....

2.....

.....

(ii) The displayed formula for methanol is



Suggest a displayed formula for ethanol, $\text{CH}_3\text{CH}_2\text{OH}$

(1)



(b) The table shows the two different processes for making ethanol on a large scale.

Process	Explanation
batch process	the fermentation of sugars with yeast
continuous process	the hydration of ethene (produced from crude oil) with steam

Compare the two processes in terms of

- the rate at which the ethanol can be produced
- the purity of the product
- the use of finite resources

(3)

.....

.....

.....

.....

.....

.....

.....

.....

.....

.....

.....

.....

.....

.....

.....

.....

.....

.....

.....

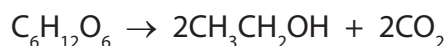
.....

.....

.....



(c) The equation for the fermentation of glucose is



A mass of 3600 kg of glucose was completely fermented.

(i) Calculate the amount, in moles, of glucose that was fermented.

(M_r of glucose = 180)

(2)

amount of glucose = mol

(ii) Deduce the amount, in moles, of ethanol produced in this reaction.

(1)

amount of ethanol = mol

(iii) Calculate the volume, in dm^3 at rtp, of carbon dioxide produced in this reaction.

(1 mol of carbon dioxide occupies 24 dm^3 at rtp)

(2)

volume of carbon dioxide = dm^3

(Total for Question 7 = 11 marks)



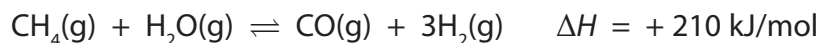
BLANK PAGE



8 The hydrogen needed for the manufacture of ammonia is made by a process called steam reforming.

In this process, a mixture of methane and steam is passed over a nickel catalyst.

The equation for the reaction is



(a) In this part of the question, assume that the reaction reaches a position of equilibrium.

(i) Predict whether a high or low temperature would produce the highest yield of hydrogen.

Give a reason for your choice.

(1)

prediction.....

reason.....

(ii) Predict whether a high or low pressure would produce the highest yield of hydrogen.

Give a reason for your choice.

(1)

prediction.....

reason.....

(b) Explain how a catalyst increases the rate of a reaction.

(2)

.....
.....
.....
.....



(c) Some of the carbon monoxide produced is removed in another reaction.

In this reaction, carbon monoxide is mixed with steam and passed over a heated catalyst.

The reaction is reversible and the carbon monoxide is oxidised to carbon dioxide.

(i) Write a chemical equation for this reaction.

(2)

(ii) Explain why the carbon in carbon monoxide is oxidised in this reaction.

(1)

(iii) The carbon dioxide produced can be removed by passing the gas through a solution of potassium carbonate, K_2CO_3

The potassium carbonate reacts with carbon dioxide and water to form potassium hydrogencarbonate, $KHCO_3$

Write a chemical equation for this reaction.

(2)

(Total for Question 8 = 9 marks)

TOTAL FOR PAPER = 60 MARKS



BLANK PAGE



BLANK PAGE



BLANK PAGE

