

Centre Number	Candidate Number	Name
---------------	------------------	------

CAMBRIDGE INTERNATIONAL EXAMINATIONS
International General Certificate of Secondary Education

GEOGRAPHY

0460/01

Paper 1

October/November 2003

1 hour 45 minutes

INSERT 1

READ THESE INSTRUCTIONS FIRST

This insert contains Fig. 1 and Table 1 for Question 1.

If you have answered Question 1, write your name, Centre number and candidate number in the spaces at the top of this page and attach the insert to your answer paper/answer booklet.

This document consists of **2** printed pages.

Fig. 1 for Question 1

Stages of population change through time

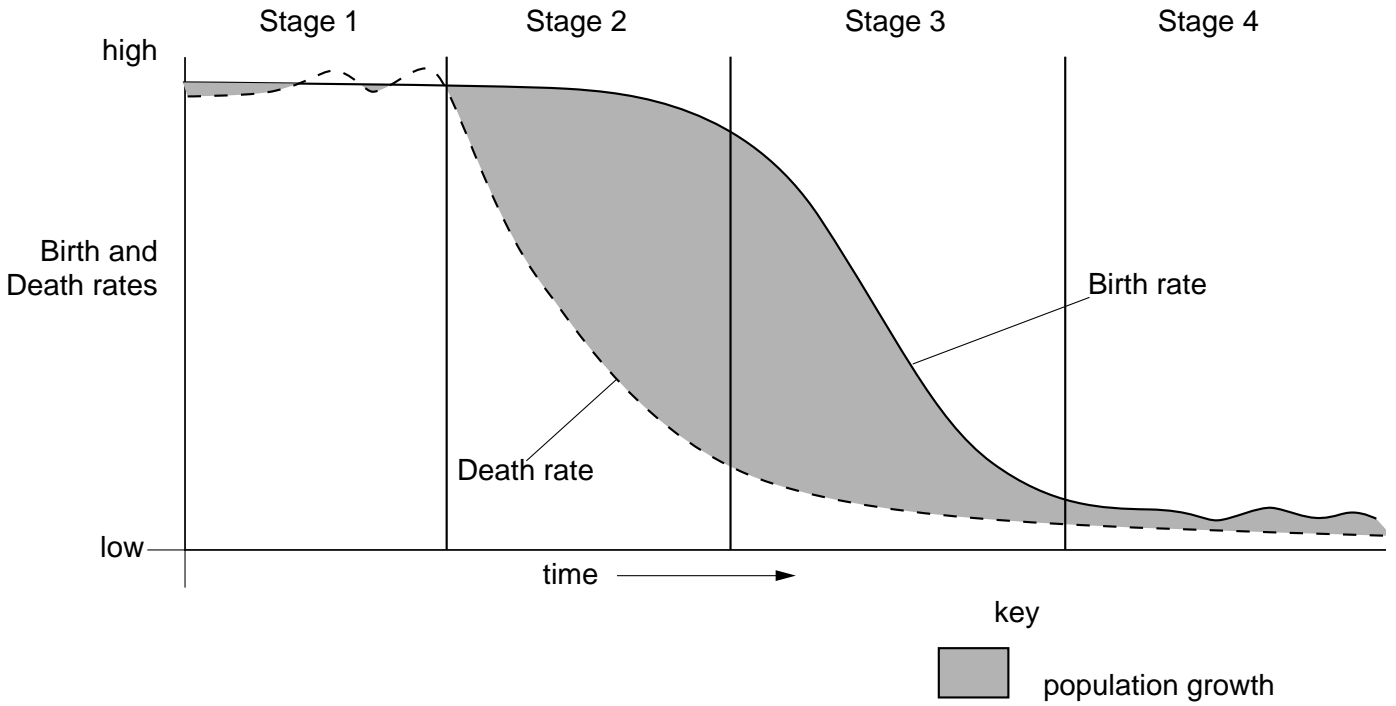


Table 1 for Question 1

Stage 1	Stage 2	Stage 3	Stage 4
high birth rate	high birth rate	falling birth rate and birth rate
..... and death rate death rate death rate	low death rate

CAMBRIDGE INTERNATIONAL EXAMINATIONS
International General Certificate of Secondary Education

GEOGRAPHY

0460/01

Paper 1

October/November 2003

INSERT 2

1 hour 45 minutes

READ THESE INSTRUCTIONS FIRST

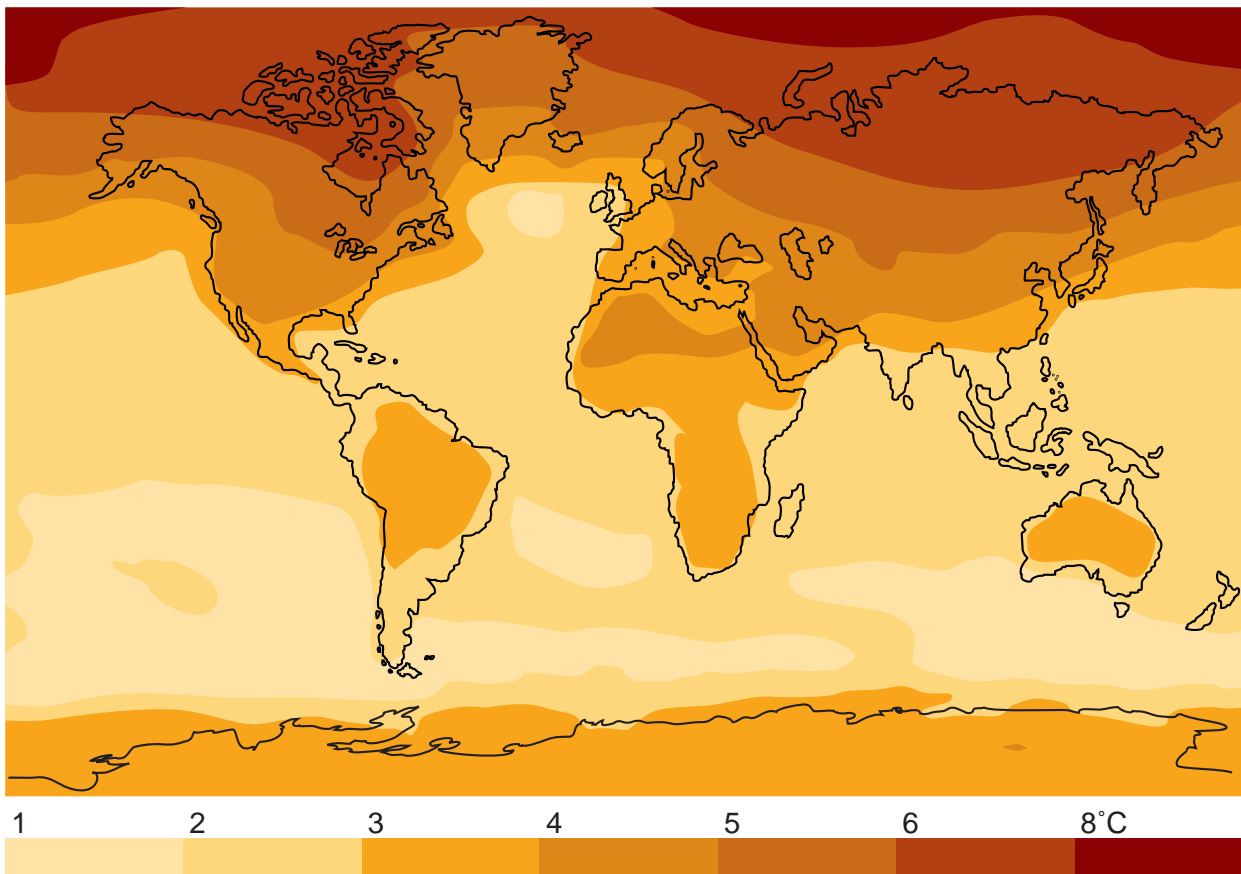
This insert contains Photograph A for Question 2 and Fig. 11 for Question 6.

This document consists of **3** printed pages and **1** blank page.

Photograph A for Question 2

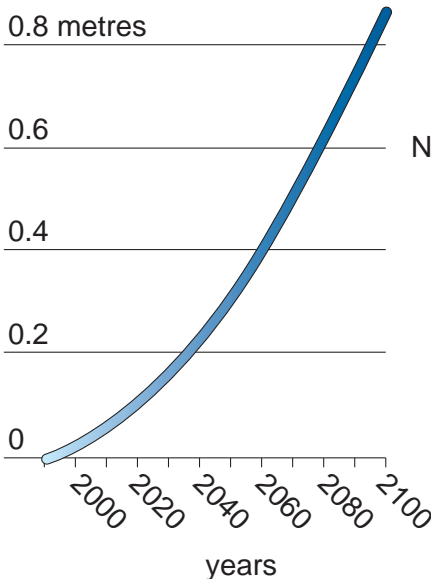
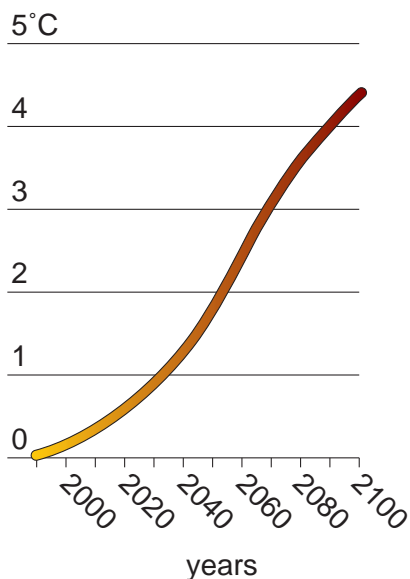


Fig. 11 for Question 6



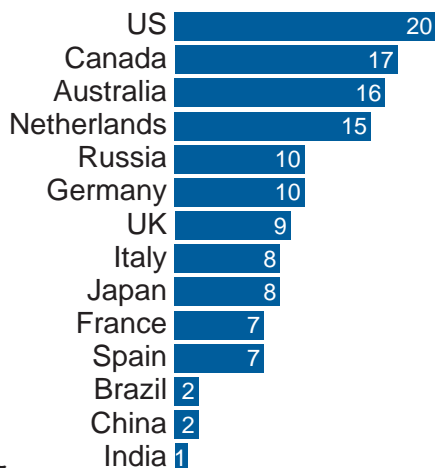
The annual mean change of the temperature between now and 2100 if the world does not act on warnings. Some areas could be 8°C hotter

Temperature change and sea level rise
without political action to cut emissions



CO₂ emissions

tonnes CO₂ emissions from fossil fuel combustion, per capita, 1998



BLANK PAGE