

Centre Number	Candidate Number	Name
---------------	------------------	------

UNIVERSITY OF CAMBRIDGE INTERNATIONAL EXAMINATIONS  
International General Certificate of Secondary Education

**GEOGRAPHY**

**0460/02**

Paper 2

May/June 2005

INSERT 1

**1 hour 30 minutes**

**READ THESE INSTRUCTIONS FIRST**

This insert contains Fig. 2 for Question 3 and Figs 6 and 7 for Question 6.

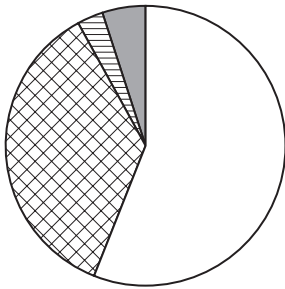
Write your Centre number, candidate number and name in the spaces provided and attach it to your answer paper/answer booklet.

This document consists of **3** printed pages and **1** blank page.

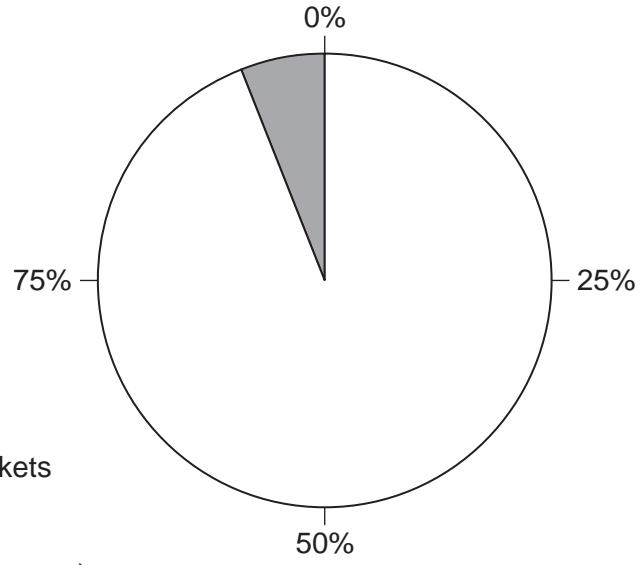






### Shopping in a Developed Country

1960s  
Total sales \$20 billion

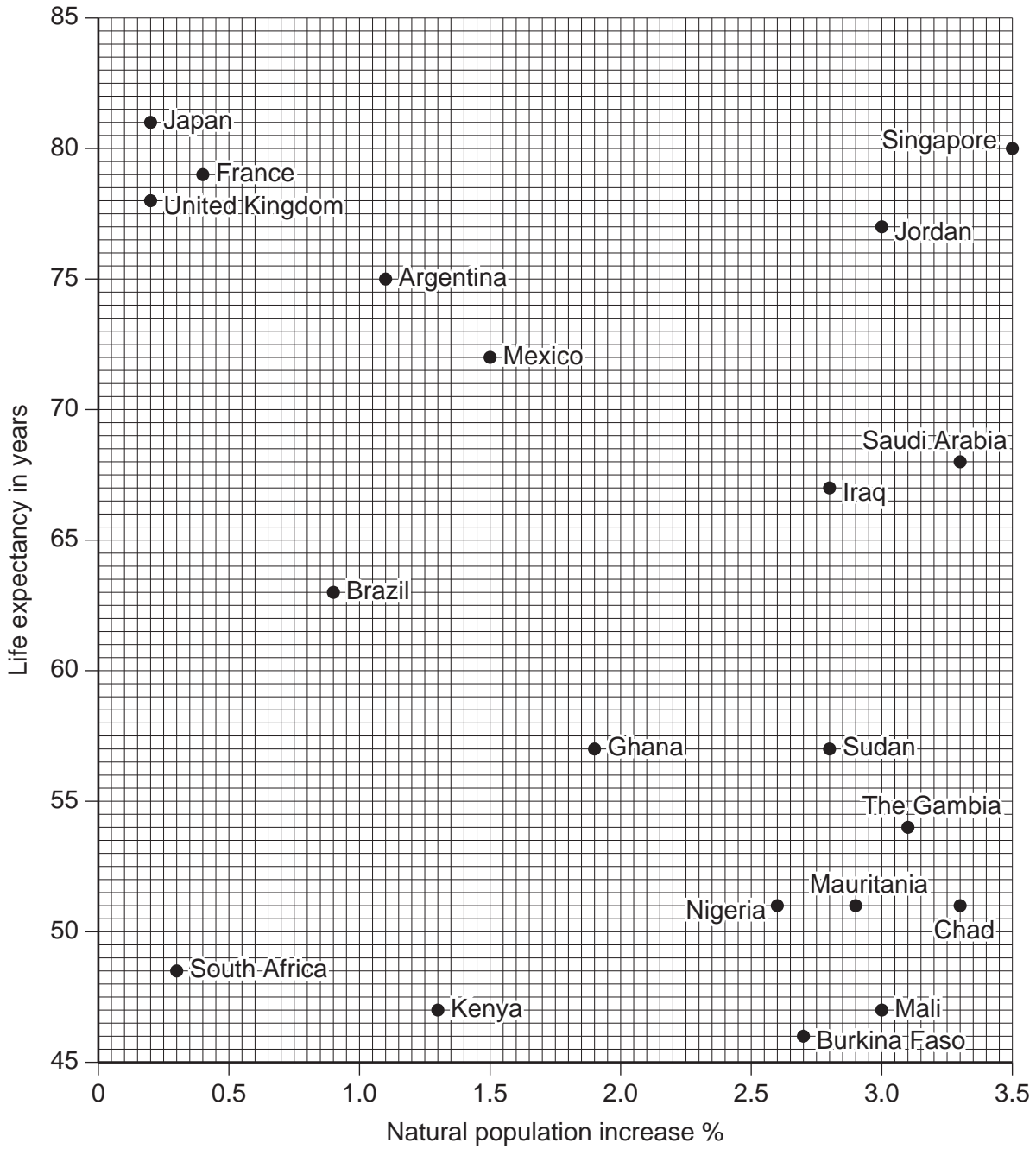


1990s  
Total sales \$170 billion



- Key:**
-  Small local shops
  -  Superstores/hypermarkets
  -  Department stores
  -  Mail order (shopping by post)

**Fig. 2 for Question 3**



**Fig. 6 for Question 6**

(..... plus .....) minus (..... plus .....)

**Fig. 7 for Question 6**



UNIVERSITY OF CAMBRIDGE INTERNATIONAL EXAMINATIONS  
International General Certificate of Secondary Education

**GEOGRAPHY**

**0460/02**

Paper 2

May/June 2005

INSERT 2

**1 hour 30 minutes**

**READ THESE INSTRUCTIONS FIRST**

This insert contains Photograph A for Question 7.

This document consists of 2 printed pages.





**Photograph A for Question 7**