



UNIVERSITY OF CAMBRIDGE INTERNATIONAL EXAMINATIONS  
International General Certificate of Secondary Education

CANDIDATE  
NAME

CENTRE  
NUMBER

--	--	--	--	--

CANDIDATE  
NUMBER

--	--	--	--



**GEOGRAPHY**

**0460/21**

Paper 2

**October/November 2013**

**1 hour 30 minutes**

Candidates answer on the Question Paper.

Additional Materials:     Ruler  
                                  Protractor  
                                  Plain paper  
                                  Calculator

1:50 000 Survey Map Extract is enclosed with this Question Paper.

**READ THESE INSTRUCTIONS FIRST**

Write your Centre number, candidate number and name in the spaces provided.  
Write in dark blue or black pen.  
You may use a soft pencil for any diagrams, graphs or rough working.  
Do not use staples, paper clips, highlighters, glue or correction fluid.  
**DO NOT WRITE ON ANY BARCODES.**

Answer **all** questions.

The Insert contains Photographs A, B and C for Question 3, and Photograph D for Question 5.

The Survey Map Extract and the Insert are **not** required by the Examiner.  
Sketch maps and diagrams should be drawn whenever they serve to illustrate an answer.

At the end of the examination, fasten all your work securely together.  
The number of marks is given in brackets [ ] at the end of each question or part question.

For Examiner's Use	
<b>Q1</b>	
<b>Q2</b>	
<b>Q3</b>	
<b>Q4</b>	
<b>Q5</b>	
<b>Q6</b>	
<b>Total</b>	

This document consists of **14** printed pages, **2** blank pages and **1** Insert.



1 Study the map extract, which is for Buffalo Range, Zimbabwe. The scale is 1:50 000.

For  
Examiner's  
Use

(a) Fig. 1 shows some of the features in the north west part of the map extract. Study Fig. 1 and the map extract, and answer the questions below.

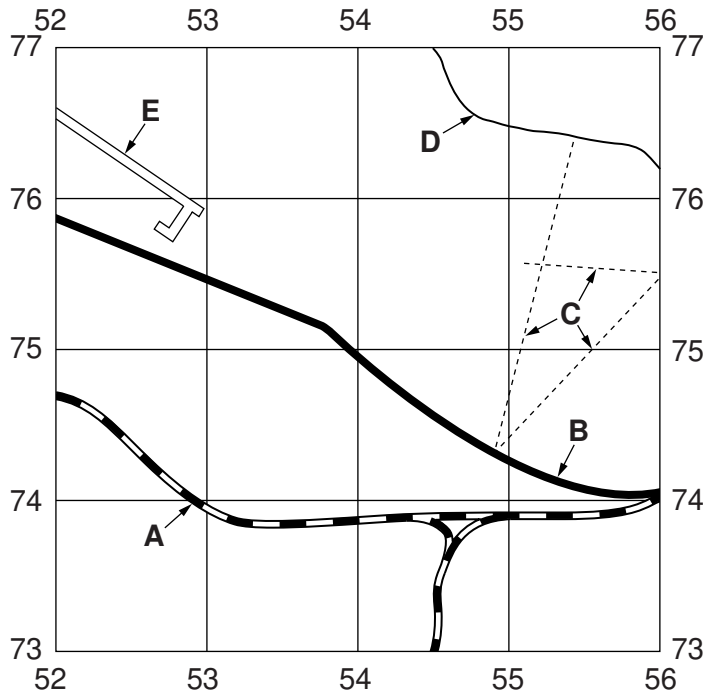


Fig. 1

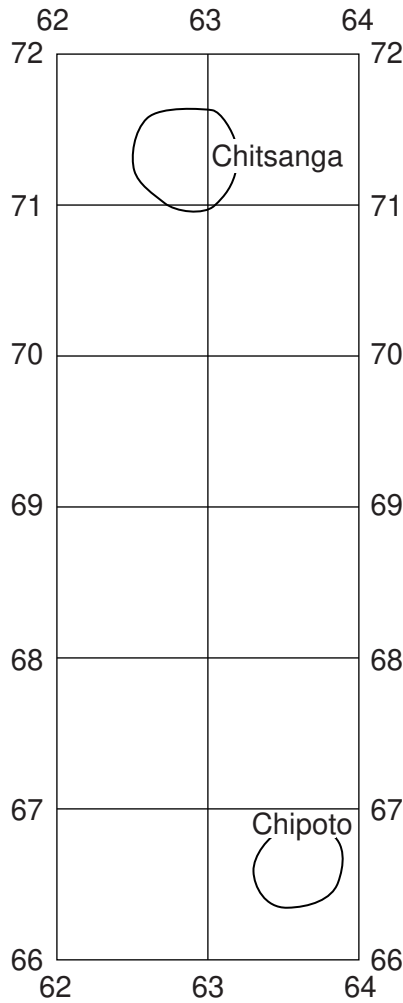
Using the map extract, identify the following **transport** features shown on Fig. 1:

- (i) feature **A**;  
.....[1]
- (ii) the type of road at **B**;  
.....[1]
- (iii) features **C**;  
.....[1]
- (iv) feature **D**;  
.....[1]
- (v) feature **E**.  
.....[1]



(d) Fig. 3 shows the location of two hills in the east part of the map extract, Chitsanga Hill and Chipoto Hill.

For  
Examiner's  
Use



**Fig. 3**

- (i) Identify the feature at the summit (top) of Chitsanga Hill.  
..... [1]
- (ii) Give the six figure grid reference of the feature at the summit of Chitsanga Hill.  
..... [1]
- (iii) Measure the distance in a straight line between the summits of the two hills. Give your answer in metres.  
..... [1]
- (iv) Measure the bearing from grid north from Chitsanga Hill to Chipoto Hill.  
..... degrees [1]
- (v) The summit of Chipoto Hill is 640 m above sea level. Which is the higher of the two hills and by how much?  
..... [1]

(e) Study the area of cultivation which covers much of the south of the map extract.

(i) Which **one** of the following statements describes the relief of this area? Tick (✓) **one** correct answer.

Statement	Tick (✓)
steeply sloping	
cliffs	
gently sloping	
ridge	

[1]

(ii) How have water supplies been developed in the cultivated area?

.....  
..... [1]

(iii) What is the map evidence of power supplies to the cultivated area?

.....  
..... [1]

(iv) What map evidence shows that housing is available for workers?

.....  
..... [1]

[Total: 20 marks]

2 Fig. 4 shows the percentage of the population aged 0 – 14 in selected countries from 2000 to 2010.

For  
Examiner's  
Use

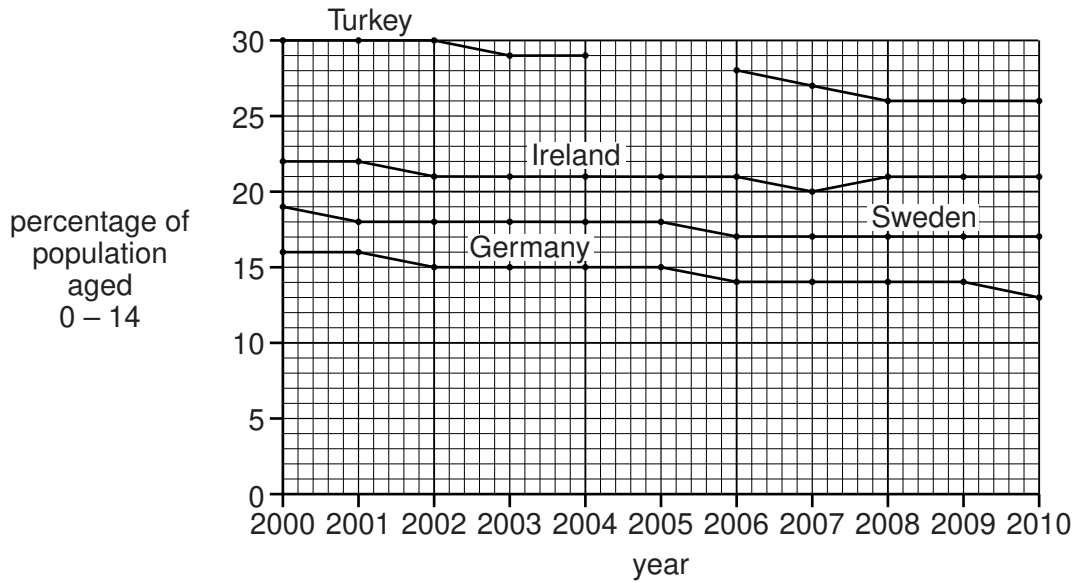


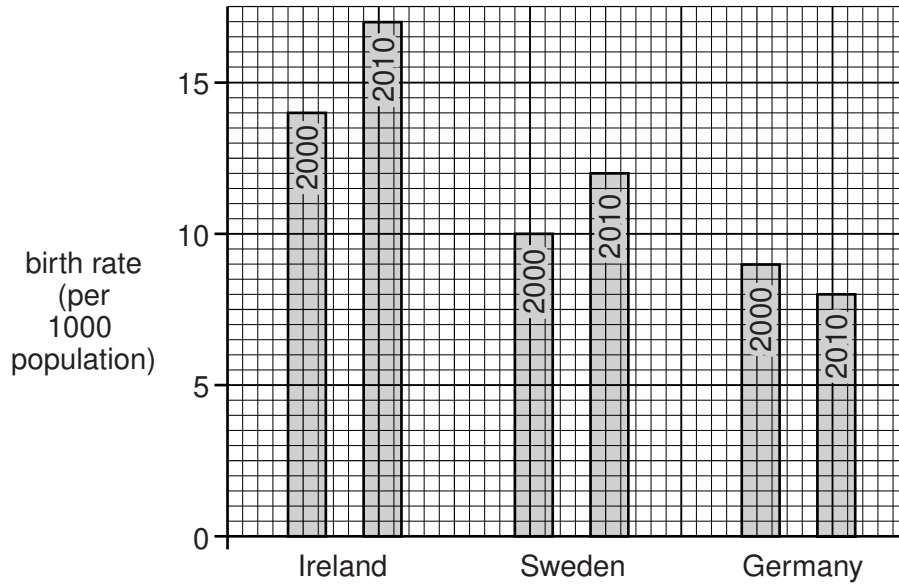
Fig. 4

(a) (i) In 2005 29% of the population of Turkey was aged 0 – 14. Complete Fig. 4 by adding this information. [1]

(ii) What percentage of the population of Germany was aged 0 – 14 in 2010?  
..... percent [1]

(iii) Describe the general changes in the percentage of the population aged 0–14 between 2000 and 2010, shown on Fig. 4. There is no need to use figures in your answer.

.....  
 .....  
 .....  
 ..... [2]



**Fig. 5**

(b) Fig. 5 shows the birth rates for three of the countries shown on Fig. 4 in 2000 and 2010. Using Fig. 5, state the birth rate of Germany in 2000.

..... [1]

(c) (i) Using Figs 4 and 5, which country is most likely to have fewer young people in the future? Tick (✓) **one** answer below.

	Tick (✓)
Ireland	
Sweden	
Germany	

[1]

(ii) Using Figs 4 and 5, which country is most likely to have the largest percentage of young people in the future? Tick (✓) **one** answer below.

	Tick (✓)
Ireland	
Sweden	
Germany	

[1]

(d) Suggest **one** advantage for a country of having a large percentage of young people.

.....  
..... [1]

[Total: 8 marks]

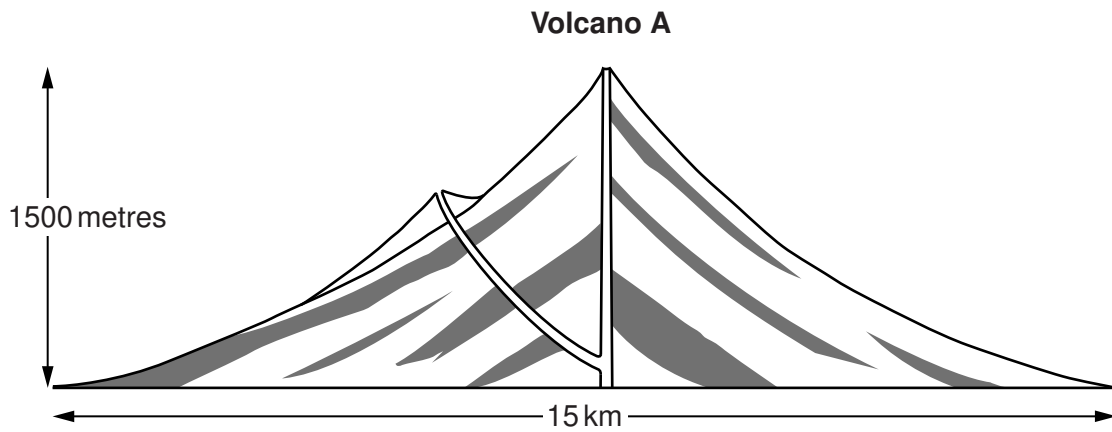




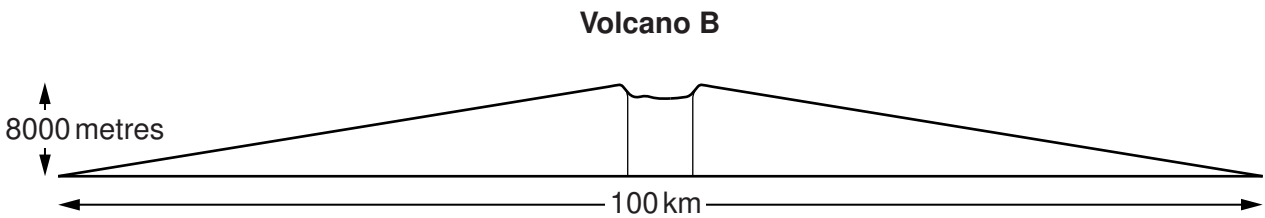
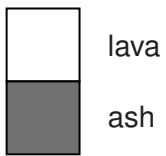


- 4 Fig. 6 shows cross-sections of two types of volcano, Volcano A and Volcano B. Study Fig. 6 and answer the questions on the opposite page.

For  
Examiner's  
Use



**Key**



**Fig. 6**



5 Photograph D (Insert) shows a coastal area.

(a) Identify features **W**, **X**, **Y** and **Z** shown on Photograph D. Choose from:

beach

arch

stack

wave-cut platform

cliff

spit

plateau

- (i) **W** ..... [1]
- (ii) **X** ..... [1]
- (iii) **Y** ..... [1]
- (iv) **Z** ..... [1]



- 6 Fig. 7 gives information about air pollution in Pennsylvania, an industrialised area of the USA.  
The sources of three air pollutants: carbon monoxide, sulfur dioxide and nitrogen oxides are shown.

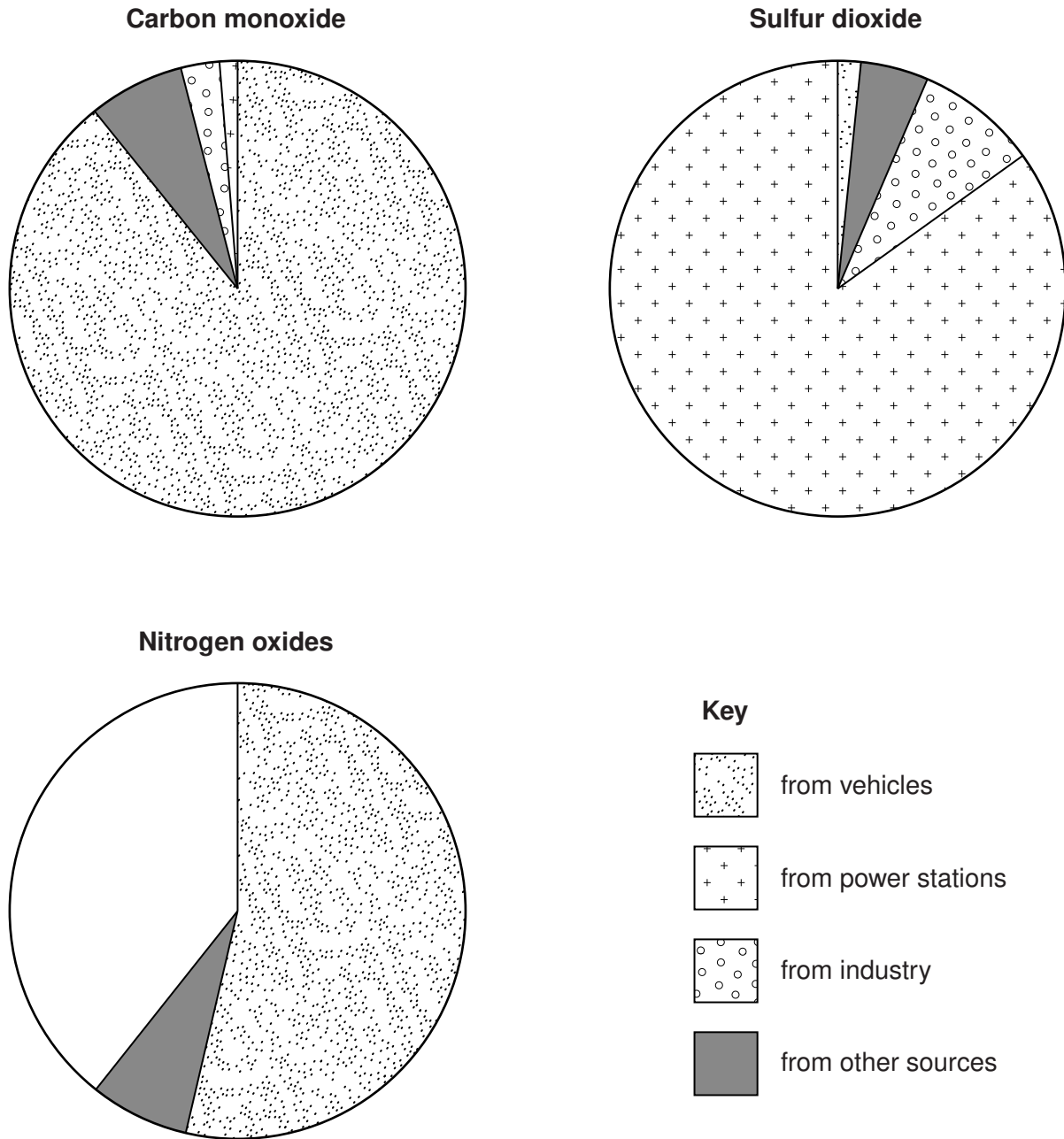


Fig. 7

- (a) Complete Fig. 7 by adding the following information: 27% of nitrogen oxides came from power stations and 12% came from industry. Use the key provided. [3]
- (b) Table 1 gives information about the effects of each type of air pollution.

For  
Examiner's  
Use

**Table 1**

Pollutant	Effect
Carbon monoxide (CO)	It can reduce the supply of oxygen to the heart, particularly for people suffering from heart disease
Sulfur dioxide (SO <sub>2</sub> )	Causes coughing and irritation of the lungs. It increases the acidity of rain
Nitrogen oxides including nitrogen dioxide (NO <sub>2</sub> )	Cause coughing and irritation of the lungs. They help to form ozone which causes photochemical smog

Using information from Fig. 7 and Table 1, explain why the following people may be in favour of reducing emissions from power stations.

- (i) a doctor;

.....  
 ..... [1]

- (ii) an environmental pressure group.

.....  
 .....  
 .....  
 ..... [2]

- (c) The government might propose changing power stations to reduce these harmful emissions. Suggest why other people might oppose these changes.

.....  
 .....  
 .....  
 ..... [2]

[Total: 8 marks]

**BLANK PAGE**

---

*Copyright Acknowledgements:*

Question 2 Figs 4 & 5      © adapted: *Eurostat*; <http://epp.eurostat.ec.europa.eu>  
Question 3 Photograph A      D Kelly © UCLES.  
Question 3 Photograph B      D Kelly © UCLES.  
Question 3 Photograph C      D Kelly © UCLES.  
Question 5 Photograph D      D Kelly © UCLES.  
Question 6 Fig. 7      © adapted: United States Environmental Protection Agency; [www.epa.gov](http://www.epa.gov)

Permission to reproduce items where third-party owned material protected by copyright is included has been sought and cleared where possible. Every reasonable effort has been made by the publisher (UCLES) to trace copyright holders, but if any items requiring clearance have unwittingly been included, the publisher will be pleased to make amends at the earliest possible opportunity.

University of Cambridge International Examinations is part of the Cambridge Assessment Group. Cambridge Assessment is the brand name of University of Cambridge Local Examinations Syndicate (UCLES), which is itself a department of the University of Cambridge.