



Cambridge International Examinations
Cambridge International General Certificate of Secondary Education

CANDIDATE
NAME

--

CENTRE
NUMBER

--	--	--	--	--

CANDIDATE
NUMBER

--	--	--	--



GEOGRAPHY

0460/11

Paper 1

October/November 2016

1 hour 45 minutes

Candidates answer on the Question Paper.

Additional Materials: Ruler
 Protractor
 Calculator

READ THESE INSTRUCTIONS FIRST

Write your Centre number, candidate number and name in the spaces provided.

Write in dark blue or black pen.

You may use an HB pencil for any diagrams or graphs.

Do not use staples, paper clips, glue or correction fluid.

DO **NOT** WRITE IN ANY BARCODES.

Write your answer to each question in the space provided.

If additional space is required, you should use the lined pages at the end of this booklet. The question number(s) must be clearly shown.

Answer **three** questions, **one** from each section.

The Insert contains Photographs A, B and C for Question 2, Photograph D for Question 4, and Photograph E for Question 6.

The Insert is **not** required by the Examiner.

Sketch maps and diagrams should be drawn whenever they serve to illustrate an answer.

At the end of the examination, fasten all your work securely together.

The number of marks is given in brackets [] at the end of each question or part question.

Definitions

MEDCs – More Economically Developed Countries

LEDCs – Less Economically Developed Countries

The syllabus is approved for use in England, Wales and Northern Ireland as a Cambridge International Level 1/Level 2 Certificate.

This document consists of **28** printed pages and **1** Insert.

Section A

Answer **one** question from this section.

QUESTION 1

- 1 (a) Study Fig. 1, which shows information about ageing population and predicted population change in selected countries.

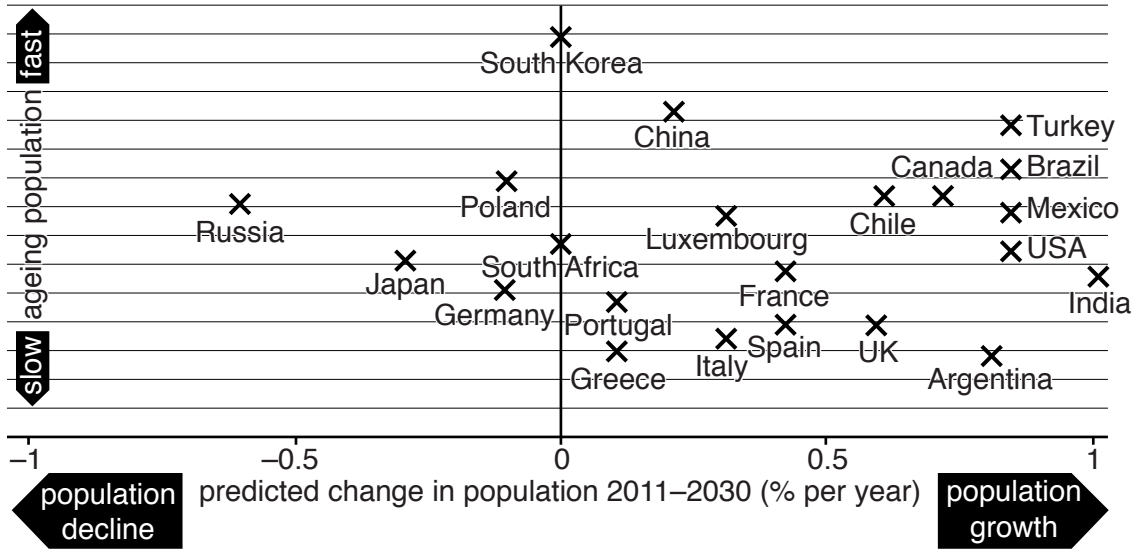


Fig. 1

- (i) Put the following countries in rank order according to how fast their population is ageing.

	China	Italy	South Korea	
1 st			fastest
2 nd			↑
3 rd			↓
				slowest

[1]

- (ii) Identify from Fig. 1:

- a country where the population is expected to decline between 2011 and 2030;
.....
- the country which is predicted to have the highest rate of population growth between 2011 and 2030.
.....[2]

(iii) One of the reasons why natural population growth rates are high in many countries is because birth rates are high.

Give **three** different reasons why birth rates are high in many LEDCs.

- 1
- 2
- 3 [3]

(iv) Explain why governments in many LEDCs are trying to reduce rates of population growth.

-
-
-
-
-
-
-
-
-
- [4]

QUESTION 2

2 (a) Study Fig. 3, which shows information about an inner city area in the USA.

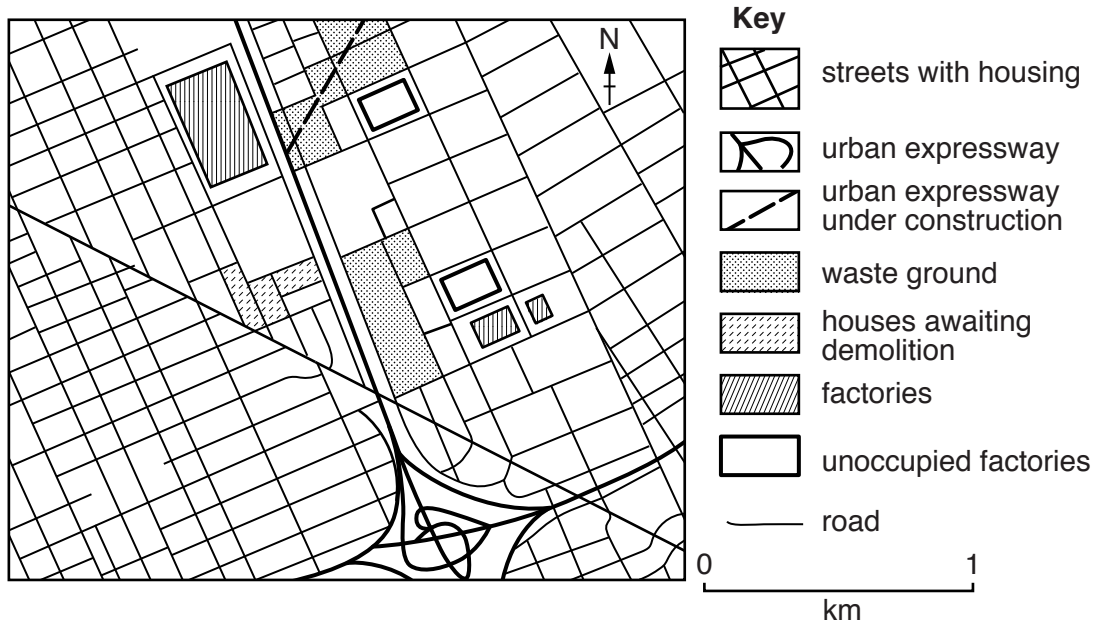


Fig. 3

(i) What is an *inner city* area?

.....
[1]

(ii) Describe the street pattern in Fig. 3.

.....

[2]

(iii) Explain why inner city areas like the one shown in Fig. 3 are being redeveloped.

.....

[3]

(b) Study Fig. 4, along with Photographs A, B and C (Insert), which were taken in different urban zones of a city.

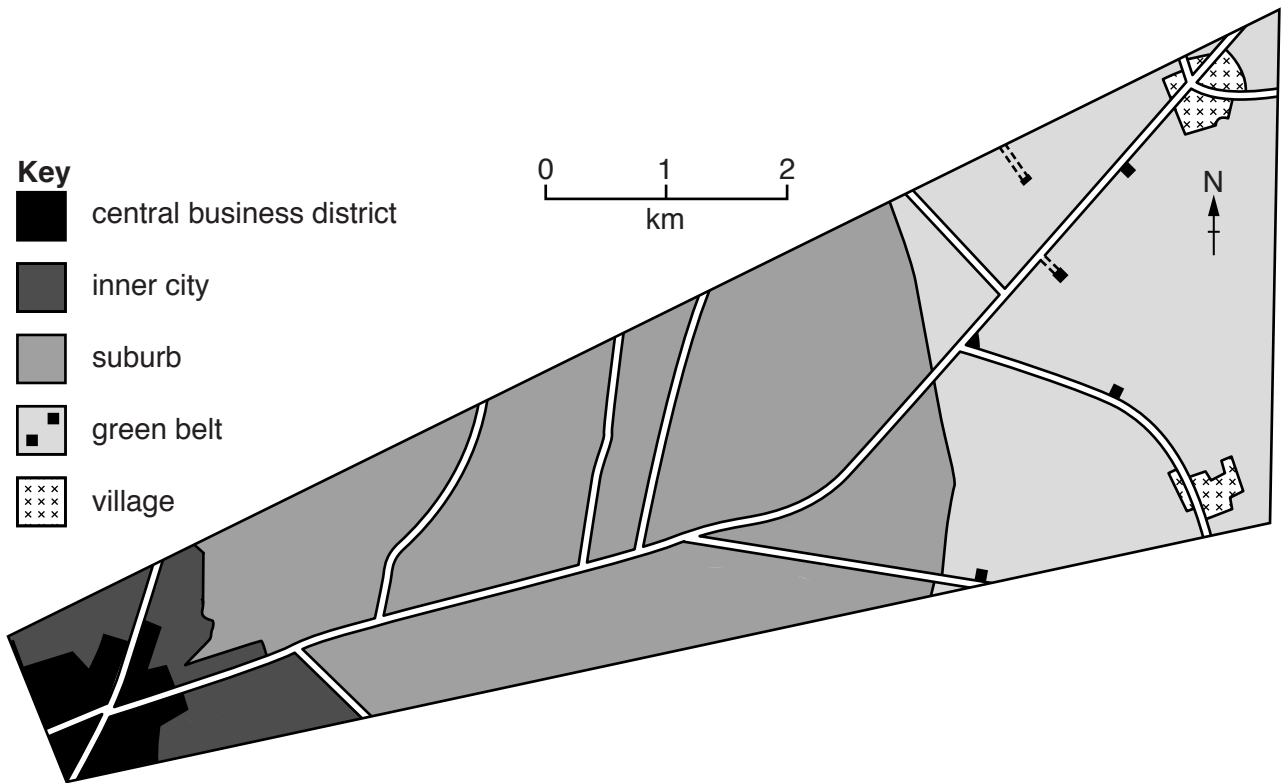


Fig. 4

(i) Using the key to Fig. 4, identify the urban zone where each photograph was taken.

Photograph A

.....

Photograph B

.....

Photograph C

.....[3]

(ii) Choose Photograph A, B or C.

For the photograph you have chosen describe the main characteristics of the land use.

Photograph

.....
.....
.....
.....
.....
.....
.....
.....[4]

(iii) Explain why land use varies in an urban area.

.....
.....
.....
.....
.....
.....
.....
.....
.....
.....
.....
.....
.....
.....
.....
.....[5]

Section B

Answer **one** question from this section.

QUESTION 3

3 (a) Study Fig. 5, which shows two different types of volcano.

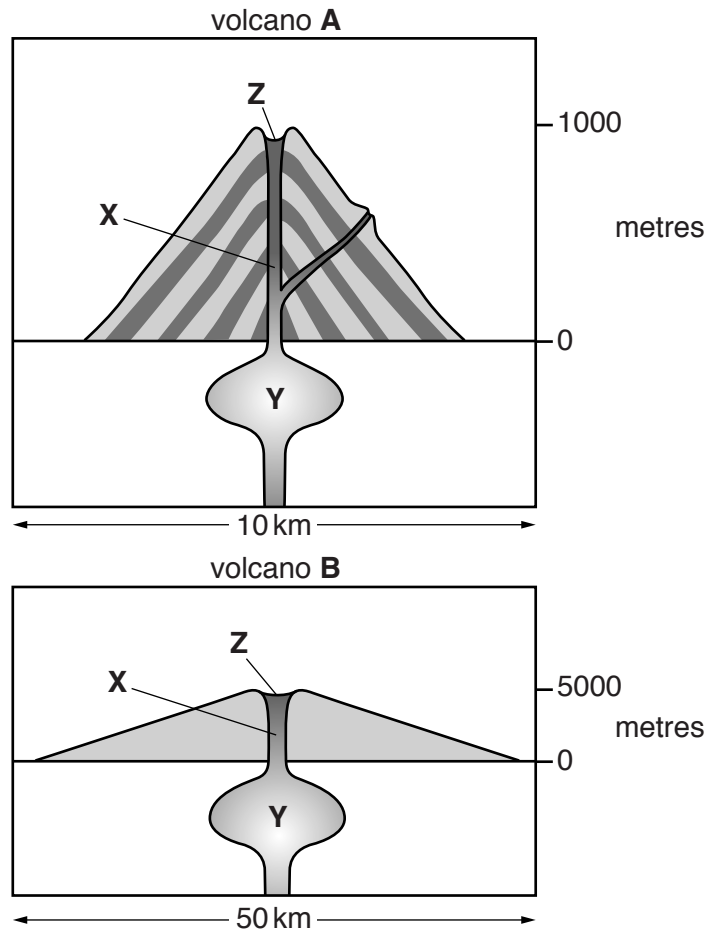


Fig. 5

(i) Name the two types of volcano shown in Fig. 5. Choose from the following:

- extinct volcano shield volcano strato-volcano

A

B

[1]

(ii) Describe **two** differences between the types of volcano shown in Fig. 5.

1

.....

2

.....[2]

QUESTION 4

4 (a) Study Photograph D (Insert), which shows a river feature.

(i) What river feature is shown in Photograph D? Choose from the following:

delta meander source

.....[1]

(ii) Describe **two** characteristics of the slope shown at **X** in Photograph D.

1

.....

2

.....[2]

(iii) Explain how slope **X** has been formed.

.....

.....

.....

.....

.....

.....[3]

(iv) Flooding and erosion are two hazards created by rivers such as that shown in Photograph D. Suggest how each of these hazards could be managed.

Flooding

.....

.....

.....

Erosion

.....

.....

.....[4]

(ii) Explain the formation of a waterfall. You may use labelled diagrams.

.....

.....

.....

.....

.....


.....

.....

.....

.....

.....



[5]

Section C

Answer **one** question from this section.

QUESTION 5

5 (a) Study Fig. 8, a map showing HDI, a measure of human development.

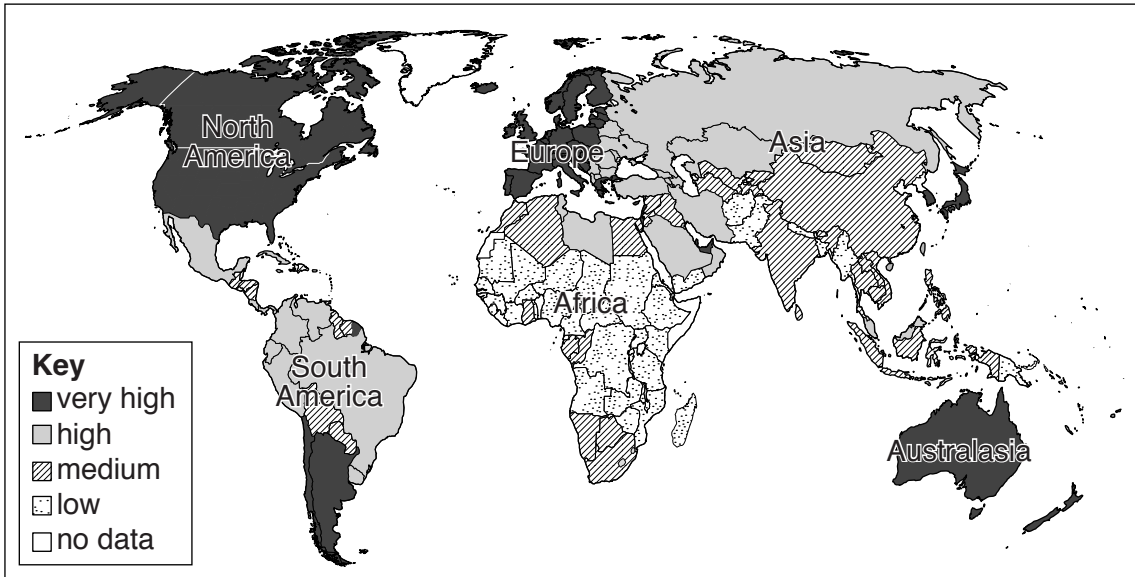


Fig. 8

(i) What do the initials *HDI* stand for?

H D I [1]

(ii) Compare the HDI in Africa and North America.

.....
.....
.....
.....[2]

(iii) Explain why HDI is a useful indicator of development.

.....
.....
.....
.....
.....[3]

QUESTION 6

6 (a) Study Fig. 10, which shows information about malnutrition in the Sahel, an area in north Africa.

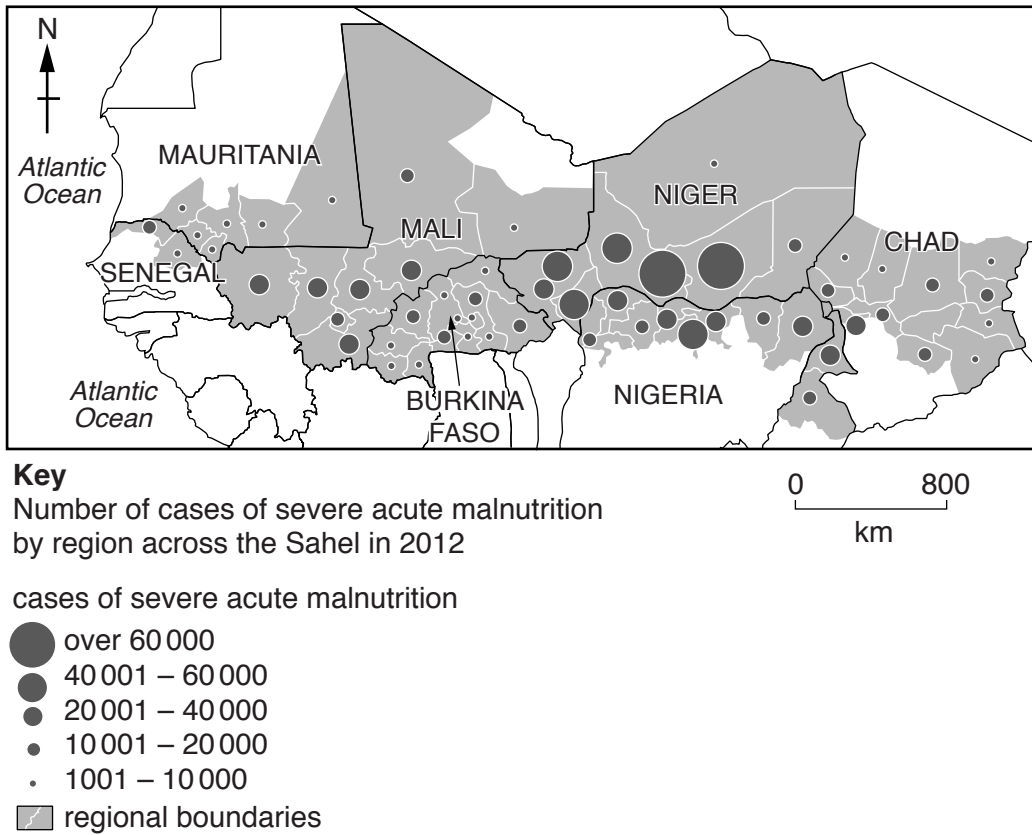


Fig. 10

(i) What is meant by *malnutrition*?

.....
[1]

(ii) Compare the number of cases of malnutrition in Burkina Faso and Niger.

.....

[2]

(iii) Give **three** different reasons why countries experience food shortages.

1

.....

2

.....

3

.....[3]

(iv) Describe the impacts of food shortages.

.....

.....

.....

.....

.....

.....

.....

.....

.....

.....[4]

